


NANKANA SAHIB PUBLIC SCHOOL, GILL PARK, LUDHIANA

Grade V Holidays Homework 2025-26 English

- ❖ Read the passages and poems from pages 153 to 158 in Grammar Bytes and practice understanding them.
- ❖ Read the newspaper daily. Cut out 3 articles and find 5 nouns and 5 pronouns from each article. Paste them in your English notebook (on the grammar side).
- ❖ Write a daily diary entry about your routine before going to bed. Ensure it's written neatly in your best handwriting.
- ❖ Complete Grammar Bytes and Notebook Work.
- ❖ Learn Lesson 2: Thunder Cake
- ❖ Complete the grammar worksheet and learn the verb forms (given below).
- ❖ Kindly observe the picture below and write a creative story using your imagination.



- ❖ Write a creative story using your imagination based on the following open-ended prompt.

Title- The Robot Who Found a Heart

HINTS - In a school science fair, a girl named Reema built a robot to help students in need. The robot began doing more than expected—comforting lonely kids and standing up for others. But one day, a stranger visited the school and said the robot didn't belong there.....What happened next? You decide.

Moral: Kindness makes us truly human.

ART INTEGRATED ACTIVITY

1) Activity: Character Mask Making – Become Your Favourite Storybook Hero!



- Choose any character from a storybook you love — it could be a brave hero, a magical creature, or even a wise old king or queen!
- Examples: Red Riding Hood, Mowgli, Tenali Raman, Cinderella, Akbar, Birbal, Harry Potter, Elsa.
- Speaking Task:
 - After making the mask, learn 3-4 dialogues of your character. These could be memorable lines from the story or lines that represent the character's personality.
- Perform these dialogues at school after the holidays in front of your class as if you're that character! Make sure to put on your mask during the performance to bring the character to life.
- Materials Needed: Paper plate or cardboard, scissors (with adult help), crayons/sketch pens, glue, string/thread/stick, any decorative materials at home.

2) Activity: My Creative Holiday Diary Page



- Choose one special or fun moment from your holidays — it could be a picnic, a day at home, a festival celebration, a funny incident, or even a dream you had!
- Write a diary entry describing:
 - What happened?
 - Who was with you?
 - How did you feel?
 - What did you learn or enjoy the most?
- Be expressive! Use words that describe your emotions like happy, surprised, excited, scared, joyful, etc.
- Decorate your diary page using: stickers, borders, or drawings related to your story.
- Materials Needed: Notebook page or A4 sheet, pencil/pen, colors/crayons, glue (optional), decorative items from home.

GRAMMAR WORKSHEET

(I) Read the following sentences and identify the type of each sentence.

- a) Kindly turn off the lights.
- b) Are you coming to the party?
- c) How did you solve this puzzle?
- d) What a clever idea!
- e) The sun rises in the east.

(II) Rearrange the following words and phrases to form meaningful sentences.

- a) /park/the/children/in/playing/are

b) /delicious/was/the/pie

c) /going/is/school/to/He

(III) Underline nouns in each sentence.

a) The stars twinkled in the night sky.

b) He opened the red box.

c) The cat jumped over the fence.

d) Mother is baking a cake.

e) The train arrived at the station.

(IV) Name the type of the underlined noun in each sentence.

a) Honesty is a good virtue. _____

b) The team played very well. _____

c) Please switch off the lights. _____

d) Emma writes short stories. _____

e) A herd of cattle crossed the road. _____

(V) Rewrite the following sentences after changing the gender of the underlined words.

a) The queen addressed the crowd.

b) The hen looked after her chicks.

c) The niece visited her aunt yesterday.

d) The actress performed wonderfully.

e) The tiger was hiding in the bushes.

(VI) Read the sentences carefully. Decide whether the underlined noun is countable or uncountable.

a) Milk is poured into the glass.

b) Bananas are rich in potassium.

c) He sprinkled sugar on the cookies.

d) The students entered the library.

e) Water was dripping from the tap.

(VII) Change the number of the underlined nouns (Singular to Plural or Plural to Singular).

a) The child is playing with a toy.

b) The geese swam in the lake.

c) The chairs were arranged in a circle.

- d) The baby cried loudly.
e) The woman is baking cookies.

VERB FORMS

<i>Verb</i>	<i>Past Tense</i>	<i>Past Participle</i>
Eat	ate	eaten
Run	ran	run
Play	played	played
Read	read	read
Jump	jumped	jumped
Go	went	gone
Have	had	had
Make	made	made
Do	did	done
See	saw	seen
Take	took	taken
Come	came	come
Speak	spoke	spoken
Write	wrote	written
Drive	drove	driven
Sing	sang	sung
Sleep	slept	slept
Buy	bought	bought
Give	gave	given
Catch	caught	caught

Science Holiday H. W

Class-5th

(1.) Learn Chapter 3, 4 for next periodic test.

(2) Prepare the model for the given topic :-

Roll no -1 Wheel Model on Deficiency disease

Roll no 21 Terrestrial plants 3D model

Roll no -3 Save planet 3D Model

Roll no 23 Lightening & Thunderstorm Model

Roll no -5 Electric Circuit

Roll no 25 Drought model

Roll no 7- Rain water harvesting

Roll no 27 Global warming model

Roll no -9 Animal pyramid (working) model

Roll no 29 Food pyramid working model

Roll no - 11 Water dispenser

Roll no 31 Plastic bottle Waterfall fountain

Roll no -13 States of matter (3D model)

Roll no-33 ATM machine

Roll no-15 Water cycle

Roll no -35 Vacuum cleaner

Roll no -17 Working model on earth, sun and moon system(Rotation and Revolution)

Roll no -37 Stethoscope

Roll no -19 Phases of moon.

Roll no -39 Gliding Joint (working model)

Roll no-41 Pivot joint (working model)

(3) Practice flowcharts on types of joints , types of muscles, states of matter.

(4) Prepare the PPT on

(a) Prevention of Communicable Diseases.

(b) Importance of Balanced Diet.

(c) Deficiency Diseases. Its Prevention and cure.

(d) Various Agricultural practices

(e) Make a diet chart for yourself for a week. Observe whether you are eating a balanced diet. If not, what measures would you take to make it balanced?

(f) Take a pot full of soft soil. Add some fertiliser to it.

Add a few grains of wheat to it.

Keep it in a place where it receives sunlight. Water it regularly.

You will find wheatgrass growing in a few days' time.
Now, list out some uses of wheatgrass.

(g) Create a logo of 3R by using natural colour of fresh leaves.

(h) CASE STUDY AND PICTURE COMPOSITION (CLASS – V)



Q1:- Case study: Have you ever wondered how the dense fog is created in the horror movies or theatres for dramatic effects?

It is done using dry ice. It directly transitions from solid to gas without becoming liquid, which is why it's called "dry ice". Dry ice, when combined with hot tap water can produce vigorous bubbling water and voluminous flowing fog.

(a) The phenomenon in which solid directly changes into gas form is called _____ .

(b) Dry is actually :-

- (i) Solid carbondioxide
- (ii) Oxygen
- (iii) Nitrogen
- (iv) Neon

(c) Dry ice does not melt into liquid (True / False)



Q2 (a) What is the phenomenon showing in the above picture :-

(i) Evaporation (ii) Camouflage (iii) colouring (iv) whitening

(b) The insect showing in the picture is a moth. (True/False)

(c) _____ shows the phenomenon of camouflage. (Polar bear/ butterfly)



Q3:- (a) The picture shown above depicts the situation of :-

(i) Earthquake (ii) flood (iii) cyclone (iv) drought

(b) Floods can cause :-

(i) Destruction of crops , houses, livestock and human life. (True / False)

(c) When there is much _____ in short duration of time it results in _____ .

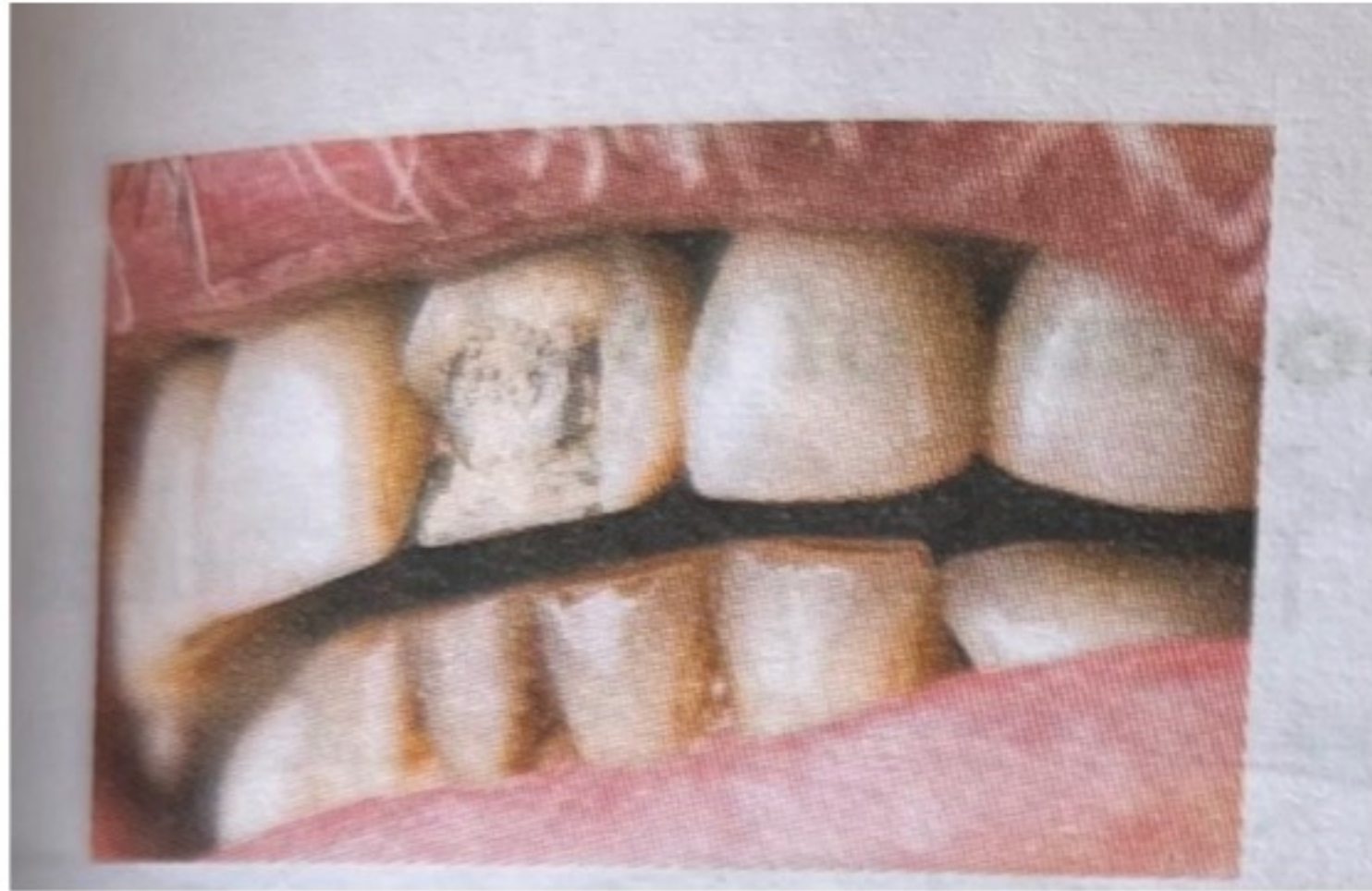


Q4:- (a)What is the phenomenon shown above in the picture :-

(i) Combustion (ii) Solubility (iii) Corrosion (iv) melting

(b) Corrosion is a chemical change. (True / False)

(c)When iron is exposed to humid air, it rusts and a _____ layer formed on it.



- (a) Name the condition shown in the picture above.
- (b) It causes due to lack of Vitamin ____.
- (i) Vitamin A (ii) Vitamin B (iii) Vitamin C (iv) Vitamin D
- (c) Orange, lemon and tamarind are the sources of Vitamin C. (True/ False)



- (a) The mixture shown above is ____ in water.
- (b) Are these two miscible or immiscible with each other ?
- (c) What are miscible liquids?

Case Study 2 :- The two brightest objects shining in the sky are the sun and the moon. However, they shine for entirely different reasons. The sun, a star at the center of the solar system, shines because of nuclear fusion within its massive core. Vast amounts of energy are released in this process which the earth experiences as light. The moon, on the other hand, is dependent on the sun. It shines only because its surface reflects sunlight. Without the sun, the moon and the earth would be very cold, dark rocks floating in space.

- (a) Does moon have its own light ?

(b) Why moon and earth would be very cold without sun ?

(c) How do moon gets its light ?

(i) Chart Making :-

Roll no- 1 to 5 (Solar Eclipse)

Roll no-6 to 10 (Water Cycle)

Roll no- 11 to 15 (States of Matter)

Roll no- 16 to 20 (Phases of Moon)

Roll no- 21 to 25 (Lunar Eclipse)

Roll no- 26 to 30 (Earthquake hypocentre and epicentre)

Roll no- 31 to 35 (Greenhouse Effect)

Roll no- 36 to 41 (Food pyramid)

Answer the following questions:-

1. The internet was originally a project of which agency?

Ans :- _____

2. What is the full form of www.

Ans :- _____

3. Write the name of process of transferring files from a computer on the Internet to your computer.

Ans :- _____

4. What is the meaning of IP in internet terminology?

Ans :- _____

5. Write the name of any two search engine.

Ans :- _____

6. Write the full form of POP3.

Ans :- _____

7. How we can move from one website to another website?

Ans :- _____

8. Write the name of any two mail service providers.

Ans :- _____

9. In which year Gmail was launched.

Ans :- _____

10. On which button we have to click to write a new mail message.

Ans :- _____

Tick (✓) the correct option:-

1. Buying goods online is called online.

a. shopping ☐

b. chatting ☐

c. reading ☐

2. Which of these is an online communication system?

a. Web browser ☐

b. Home page ☐

c. E-mail ☐

3. transfers digital information over telephone line.

a. Mozilla ☐

b. Google ☐

c. Modem ☐

Answer the following questions:-

1. The internet was originally a project of which agency?

Ans :- _____

2. What is the full form of www.

Ans :- _____

3. Write the name of process of transferring files from a computer on the Internet to your computer.

Ans :- _____

4. What is the meaning of IP in internet terminology?

Ans :- _____

5. Write the name of any two search engine.

Ans :- _____

6. Write the full form of POP3.

Ans :- _____

7. How we can move from one website to another website?

Ans :- _____

8. Write the name of any two mail service providers.

Ans :- _____

9. In which year Gmail was launched.

Ans :- _____

10. On which button we have to click to write a new mail message.

Ans :- _____

Tick (✓) the correct option:-

1. Buying goods online is called online.

a. shopping ☐

b. chatting ☐

c. reading ☐

2. Which of these is an online communication system?

a. Web browser ☐

b. Home page ☐

c. E-mail ☐

3. transfers digital information over telephone line.

a. Mozilla ☐

b. Google ☐

c. Modem ☐

Nankana Sahib Public School, Gill Park, Gill Road, Ludhiana
Class 5th
Hindi Holidays Homework
June, 2025

1- पाठ 1,2,3,4 की पुस्तक अभ्यास कार्य और प्रश्न उत्तर सहित दोहराई करें।

2. भारत के कोई दस राष्ट्रीय प्रतीक (चिह्न) हिंदी की उत्तर पुस्तिका (Fair notebook) पर रंगों से बनाए और उनके नाम लिखें।

3- भगत सिंह की भांति अन्य दो भारतीय स्वतंत्रता सेनानियों की चित्र सहित जानकारी लिखिए

प्रश्न 4- भाषा की सबसे छोटी इकाई क्या है ?

प्रश्न 5- वर्णों के समूह को क्या कहते हैं ?

प्रश्न 6- हिंदी वर्णमाला में स्वर और व्यंजनों की संख्या लिखें।

प्रश्न 7- स्वर के भेदों के नाम बताइए।

प्रश्न 8- संज्ञा की परिभाषा उदाहरण सहित लिखिए और संज्ञा भेदों के नाम लिखें।

प्रश्न 9- सर्वनाम के भेद के नाम उदाहरण सहित लिखिए।

प्रश्न 10- लिंग बदलकर पूरा वाक्य दोबारा लिखें।

क- पुत्र ने सुंदर चित्र बनाया।

ख - हथिनी चिंघाड़ रही है।

ग - दाता ने मंदिर में दान दिया।

घ - चिड़ा दाना चुगता है।

ङ- विधुर ने सफेद कपड़े पहने हैं।

प्र11- वचन बदलकर पूरा वाक्य दोबारा लिखें।

क - घंटी बज रही है।

ख - थाली सजा दो।

ग - दवा खरीद कर लाओ।

घ - किताब इधर -उधर मत रखो।

ङ- नाव किनारे पर लगी है।

12- कोई एक अनुच्छेद लिखिए -

समय बलवान है।

या

हमारे राष्ट्रीय पर्व

13- अवकाश लेने के लिए प्रधानाचार्या जी को प्रार्थना पत्र लिखें।

या


मित्र / सहेली को जन्मदिन की बधाई देते हुए पत्र लिखिए।

14- नीचे दिए गए शब्दों के विलोम शब्दों से शब्द सीढ़ी पूरी करके लिखिए।

1. अशुभ	×	_____
2. बुरा	×	_____
3. नालायक	×	_____
4. कोमल	×	_____
5. नीरस	×	_____
6. असफल	×	_____
7. सबल	×	_____

1 शु	2
3 ला	4 क
5 स	6 सं
7 नि	ल

15- दिए गए चित्र का वर्णन 25 से 30 शब्दों में करें।



NOTE – Do Holiday's Homework on your Hindi fair notebook .

Write – स्वरचित कविता, लेख, कहानी on A4 sheet with your Name, Class, Section

Nankana Sahib Public School

Holidays Homework

Grade 5, Mathematics

Q-1 Write in the standard form.

a) $900000+8000+700+60+5=$

b) $200000+300+80+7=$

Q2. Write the expanded form of the following numbers.

a) 47612342

b) 60000587

Q3. Fill in the blanks.

a) $68735 = \underline{\hspace{1cm}} \text{ten thousand} + \underline{\hspace{1cm}} \text{thousand} + \underline{\hspace{1cm}} \text{hundred} + \underline{\hspace{1cm}} \text{tens} + \underline{\hspace{1cm}} \text{ones}$

b) $589044 = \underline{\hspace{1cm}} \text{lakhs} + \underline{\hspace{1cm}} \text{ten thousand} + \underline{\hspace{1cm}} \text{thousand} + \underline{\hspace{1cm}} \text{tens} + \underline{\hspace{1cm}} \text{ones}$

4) The short form of $9 \times 1000000 + 6 \times 10000 + 5 \times 1000 + 5 \times 10 + 7 \times 1$ is.....

5) One more than the largest 7 digit number gives-_____

6) Twenty five lakh would be read as in the International place value chart.

7) The number 500 more than 63400 is

8) There are _____ zeros in one crore

9) The place value of 9 in 59236804 is

10. 1 Million = _____ Lakhs

Q11. Write the numeral for the following:

a) Twelve million eighty five thousand.

b) Fifty five crore ten lakh sixty five thousand.

Q12. Insert commas and write number name for the each of the following in Indian system of numeration as well as in International system of numeration.

a) 76800935

b) 27165089

Q13. Write the Roman numeral for each of the following Hindu-Arabic numerals.

a. 78 _____. b. 399 _____

c. 189 _____. d. 2449- _____

e. 1247 _____. f. 683 _____

Q14. Write the Hindu-Arabic numerals corresponding to each of the following

a. LXIX _____. b. CCLIX _____

c. XCI _____. d. CCXCVI _____

e. CXLVI _____

f. CCCLXXXV _____

Q15. Solve and write the answer in Roman numerals.

a. CIX + XCI _____

b. CCIX × VI _____

d. CDXXXVI – CCXXII _____

Q-16 Round off given numbers to the nearest 10s, 100s and 1000s

a) 74,186

b) 7,81,943

Q-17 Fill in the blanks

a. $999999 \div 999 =$ _____.

b. $5,60,000 \div 14,000 =$ _____.

c. The sum of smallest 4-digit number and greatest 5-digit number is _____.

d. The difference of place value at the hundreds place of 200,326 and 186,418 is _____.

- e. The result of a multiplication is called _____.
- f. The difference is _____ than the Minuend.
- g. 1000 times 7, 12,286 is _____.
- h... $4567 \times 543 \times \underline{\hspace{2cm}} \times 5578 = 0$
- I $600 \times 3000 \times 200 = \underline{\hspace{2cm}}$.
- J .When we multiply 0 by any number, the result is always - _____
- k..Any number multiplied by 1 is _____
- l..The number being multiplied is called the _____
- m.The number we multiply by is called the - _____
- n.The opposite of multiplication is _____
- o.The number being divided is called the - _____
- p.The number we divide by is called the - _____
- q.The answer to a division problem is called the _____

Q-18 Find the product of 224 and 3421.

Q20 .Form the greatest and smallest 6-digit number using the digits 8, 1, 0, 4, 3 and find the sum of the newly formed numbers.

Q19.Subtract 13, 91,803 from 52, 09,129.

Q20.Find the sum of 2, 43,829; 14, 54,628 and 8, 39,249.

Q21.Add 56.67,789 and 54, 76,089.

Q22.Divide and find the quotient and remainder. Also verify your answer .

$$764398 \div 75$$

Q23. Mr. Das saves Rs. 7500 in a month. How much money will he save in a year?

Q24.Find the cost of 586977 books if each book costs Rs. 450.

Q25. Estimate the following

a) 26157×125 . (Nearest 100s)

b) $13254 \div 33$. (Nearest 10s)

c) $26514321 - 1256433$ (nearest 1000s)

d) $79,82,531 + 25,17,769$ (nearest 1000s)

Q26. 32 bags of rice weigh 1216 Kg. Estimate the weight of 8 bags of rice

Q27. Fill in the blanks

a. A factor of a number is _____ the number

a) less than or equal to

b) less than itself

c) equal to

b. Every number is a multiple of

a) 1. b) 0 C) 100

c. A number is divisible by 6, if it is divisible by

a) 3. B) 2. C) both by 2 and 3

d. Any number having _____ digit in its ones place is divisible by 2

a) odd. B) single. C) even

e. Two prime numbers with a difference of 2 are called,

a) A prime triplet. B) Twin primes

c) Co primes

f. The prime factorisation of 30 is

a) $2 \times 2 \times 7$. B) $3 \times 3 \times 5$ c) $2 \times 3 \times 5$

g. 59,704 is divisible by _____

Q28. Circle the numbers that are multiples of 8.

8, 16, 20, 32, 36, 40, 24, 30,

Q29. Write the first three multiples of:

a) 13. B) 14. C) 17

Q30. Write the least common multiple of 2, 8, and 12.

Q31. Write the least common multiple for each set of numbers.

- a) 12 and 20
- b) 6 and 14

Q32. List all the factors for each number Using- Factor tree method . Is the number prime?

- a) 87. B) 196. C)75

Q33. Write the prime numbers between 11 and 30.

Q34. Check the divisibility of given numbers.

- (i) 86, 190 by 3;
- (ii) 2, 37, 405 by 11;
- (iii) 47, 815 by 3
- (iv) 81, 620 by 4

Q35. Find HCF using prime factorisation method

- a)78,256. B)119,136

Q36. Find LCM using division method

- a)40,88. B)39,66and 45

Q-37. John swims every 8 days, runs every 6 days and cycles every 12 days. If he did all the three activities today, in how many days will he do all the three activities together again?

Q-38. Cups are sold 8 to a package and plates are sold 10 to a package. If you want to have the same number of each item for a party, what is the least number of packages of each you need to buy?

Q-39. There are 72, 108 and 132 strawberries in three different baskets. What is the largest group into which the strawberries can be split, if they have to be arranged equally?

Project work

■ Make a chart on A3 sheet and decorate it on the following topic according to your roll number.

Roman Numerals from 1 to 100 (1-5)

Types of Angles (6-10)

Types of fractions (7-15)

Divisibility rules (16-20)

Prime and composite numbers from 1 to 100 (21-25)

Triangles (based on sides and angles) (26-30)

Perimeter and Area (Regular and irregular shapes). (31-35)

2D shapes and 3D shapes (36 onwards....)

Write and learn tables from 2 to 20

NANKANA SAHIB PUBLIC SCHOOL, GILL PARK, LUDHIANA

Class 5th Subject- Social Studies

A. Learn L-3 and 4 full for Periodic test 2.

B. Make a 3D or working model according to your roll no.

<u>Roll no.</u>	<u>Topic</u>
2 and 40	Globe
4 and 42	States of India
6	Revolution of Earth
8	Realms of the Earth
10.	Air Pollution
12.	Grasslands
14.	Frigid Zone
16	Conservation of Environment
18.	An area showing signs and symbols
20.	Structure of Earth
22.	Volcano
24	Parliament of India
26.	Any one heritage site
28.	Water pollution
30.	Earthquake

- 32. Important lines of latitude
- 34. Climatic zones of Earth
- 36. Layers of vegetation in equatorial region
- 38. Rotation of Earth

Note:- Thermocol is not allowed for making models.

C. Make a chart on A3 size sheet according to the Roll no.

<u>Roll no.</u>	<u>Topic</u>
1. 1-10	Atmospheric Composition of Earth
2. 11-20	Freedom Fighters
3. 21-30	Layers of Vegetation
4. 31 onwards	Natural v/s Human made disaster

D. Prepare a scrapbook of the Continents of the world; include pictures and information about the major cities and tourist attractions of the continents and some fun facts about them.

E. Learn the names of all the States and their Capitals and locate them on Indian Political Map.

F. Take a printout of the given assignment and solve and paste it in notebook.

Class-5(Social Science)

Chapter -3,4,5

A . Choose the correct option.

1. _____ is the zone of life on the Earth.

- a. Lithosphere b. Atmosphere. c. Biosphere

2. _____ is known as the blue planet.

- a. Earth. b Venus. c. Mercury

3. The path in which a heavenly body moves in space.

- a. Axis b. Orbit. c. rotation

4. What causes tides?

- a. Rotation. b. Revolution. c.Orbit

5. The shortest day in northern hemisphere is

- a.25 Dec. b. 22 Dec. c. 24 Dec.

6. _____ gas comprises nearly 79% of the atmosphere.

- a. Hydrogen. b. Nitrogen. c. Oxygen

7. The continuous movement of the water is known as _____

- a. Water Cycle b. Rain. c.Snow

8. A large landmass.

- a. Continent. b. Ocean c. mountains

9. 250 million years ago, all the continents formed a super continent known as _____.

- a. Australia. b Pangea. c. Africa

10. _____ is a world famous coral reef.

- a. Great Barrier leaf. b. Victoria Falls c. Denali

B. Fill in the blanks.

1. _____ refers to the spinning movement of the Earth on its own axis.
2. During _____ the length of day and night are equal.
3. In leap year, February has _____ days.
4. Earth rotates from _____ to _____.
5. We breathe _____ gas present in the atmosphere.
6. _____ destroys the habitat of animals living in the forest.
7. Hydrosphere includes _____, _____ and _____ on the surface of the Earth.
8. _____ envelopes the Earth like a blanket.
9. _____ ocean is the only ocean named after a country -India.
10. _____ is the shallowest of all oceans.

C. State whether it is TRUE or False.

1. Lithosphere consists of four layers. _____
2. Earth is made up of both living and non- living things. _____
3. We must not protect the biosphere from all harm. _____
4. The longest day in northern hemisphere is 22 December. _____
5. A normal calendar constitutes only 366 days. _____
6. Seasons are caused due to the rotation of the Earth. _____
7. During revolution, the sun shines twice directly over the equator. _____
8. Most parts of the Arctic Ocean remain frozen throughout the year. _____

D. Matching

- | | |
|-----------------------|----------------------|
| 1. Summer solstice. | A. Middle layer |
| 2. Axis of the Earth. | B. Uppermost Layer |
| 3. Seasons. | C.Innermost layer |
| 4. Atmosphere. | D.21 March |
| 5. Mantle. | E. Air |
| 6. Crust. | F. 21 June |
| 7. Core. | G. four |
| 8. Equinox. | H. An imaginary line |
| 9.The Atacama desert. | I.Nile |
| 10. longest river. | J. South America |

E. Draw a flow chart of
Earth's movements
and
Four Realms of the Earth.

ਗਰਮੀ ਦੀਆਂ ਛੁੱਟੀਆਂ ਦਾ ਕੰਮ

ਵਿਸ਼ਾ – ਪੰਜਾਬੀ

ਜਮਾਤ – 5ਵੀਂ

◆ ਯਾਦ ਕਰਨ ਦਾ ਕਾਰਜ

ਪਾਠ 5 , 6 , 7, 8 ਅਭਿਆਸ ਕਾਰਜ(ਸ਼ਬਦ ਅਰਥ, ਵਾਕ, ਖਾਲੀ ਥਾਂਵਾਂ, ਪ੍ਰਸ਼ਨ -ਉੱਤਰ)

ਵਿਆਕਰਨ - ਮੁਹਾਵਰੇ (ਉ,ਅ, ਏ ਅੱਖਰ ਤੋਂ ਸ਼ੁਰੂ ਹੋਣ ਵਾਲੇ ਪਹਿਲੇ 5 ਮੁਹਾਵਰੇ ਯਾਦ ਕਰੋ)


ਸਮਾਨਾਰਥਕ ਸ਼ਬਦ (ਸਫ਼ਾ- 77,78 ਪਹਿਲੀ ਸਤਰ ਯਾਦ ਕਰੋ।)

◆ ਲਿਖਤੀ ਕਾਰਜ

1. ਪਾਠ -5,6,7,8 ਨੂੰ ਚੰਗੀ ਤਰ੍ਹਾਂ ਪੜ੍ਹੋ ਅਤੇ ਹਰੇਕ ਪਾਠ ਵਿੱਚੋਂ ਕੋਈ ਪੰਜ – ਪੰਜ ਨਵੇਂ ਪ੍ਰਸ਼ਨ ਤਿਆਰ ਕਰਕੇ ਉੱਤਰ ਅਲੱਗ ਕਾਪੀ ਤੇ ਸੁੰਦਰ ਲਿਖਾਈ ਵਿੱਚ ਲਿਖੋ।
2. ਪੰਜਾਬੀ ਅਖਬਾਰ ਵਿੱਚੋਂ ਕੋਈ 5 ਕਹਾਣੀਆਂ ਪੜ੍ਹ ਕੇ ਉਹਨਾਂ ਦਾ ਸਾਰਾਂਸ਼ (ਸੁੰਦਰ ਲਿਖਾਈ) ਲਿਖੋ ।
3. A4 size sheet ‘ਤੇ ਕਿਸੇ ਵੀ ਵਿਸ਼ੇ ਤੇ ਸਵੈ ਲਿਖਤ (ਕੋਈ ਕਵਿਤਾ, ਕਹਾਣੀ, ਸਫ਼ਰਨਾਮਾ) ਲਿਖੋ।

◆ ਕਲਾ ਸਮੱਲਿਤ ਗਤੀਵਿਧੀ ਕਾਰਜ-

1. ਨਾਂਵ ਅਤੇ ਉਸਦੀਆਂ ਕਿਸਮਾਂ ਦਾ ਚਾਰਟ ਬਣਾਓ (ਰੋਲ ਨੰਬਰ 1-21 ਤੱਕ)
2. ਪੜਨਾਂਵ ਅਤੇ ਉਸਦੀਆਂ ਕਿਸਮਾਂ ਦਾ ਚਾਰਟ ਬਣਾਓ (ਰੋਲ ਨੰਬਰ 22-42 ਤੱਕ)
3. ਗੁਰੂ ਅਰਜਨ ਦੇਵ ਜੀ ਦੀ ਸ਼ਹੀਦੀ ਦਿਹਾੜੇ ਸੰਬੰਧੀ ਬਿਰਤਾਂਤ ਕਾਪੀ ਤੇ ਲਿਖੋ।
4. ਹੇਠਾਂ ਦਿੱਤੀ ਤਸਵੀਰ ਬਾਰੇ 60-70 ਸ਼ਬਦ ਲਿਖੋ।



ਹੇਠਾਂ ਦਿੱਤੀ ਅਸਾਈਨਮੈਂਟ ਆਪਣੀ ਕਾਪੀ ਤੇ ਕਰੋ।

ਵਚਨ ਬਦਲ ਕੇ ਵਾਕ ਦੁਬਾਰਾ ਲਿਖੋ

1. ਕਮਰੇ ਦੀ ਚਾਬੀ ਲੱਭੋ ।
2. ਬਾਲੜੀ ਪੜਦੀ ਹੈ।
3. ਕੁੰਡਾ ਖੋਲ ਦਿਓ।
4. ਮੰਦਰ ਵਿੱਚ ਆਰਤੀ ਹੋ ਰਹੀ ਹੈ।
5. ਮਾਂ ਠੰਡੀ ਛਾਂ ਹੁੰਦੀ ਹੈ।
6. ਬੱਚੀ ਭੋਲੀ ਹੈ।

7. ਗਾਂ ਬੱਚੇ ਨਾਲ ਪਿਆਰ ਕਰਦੀ ਹੈ।

8. ਵਿਆਹ ਵਿੱਚ ਚਾਚਾ ਅਤੇ ਮਾਮਾ ਨੱਚ ਰਹੇ ਹਨ।

9. ਮੋਰਨੀ ਪੈਲ ਪਾ ਰਹੀ ਹੈ।

10. ਕਾਂ ਨੇ ਰੌਲਾ ਪਾਇਆ।

ਲਿੰਗ ਬਦਲ ਕੇ ਵਾਕ ਦੁਬਾਰਾ ਲਿਖੋ

1. ਮੁੰਡਾ ਆਪਣੇ ਨਾਨੇ ਨਾਲ ਬਹੁਤ ਪਿਆਰ ਕਰਦਾ ਹੈ।

2. ਚੌਧਰੀ ਨੰਬਰਦਾਰ ਕੋਲ ਗਿਆ।

3. ਕੁੜਮ ਵਿਆਹ ਵਿੱਚ ਨੱਚ ਰਿਹਾ ਸੀ।

4. ਸਪੇਰਾ ਸੱਪ ਨੂੰ ਫੜ ਰਿਹਾ ਹੈ।

5. ਅਧਿਆਪਕ ਬੱਚਿਆਂ ਨੂੰ ਪੜ੍ਹਾ ਰਿਹਾ ਸੀ।

6. ਜੰਗਲ ਵਿੱਚ ਗਿੱਦੜ ਅਤੇ ਲੁੰਬੜ ਵੇਖਿਆ।

7. ਕਬੂਤਰ ਟਹਿਣੀ ਤੇ ਬੈਠਾ ਹੈ।

8. ਨੌਕਰ ਸਰਦਾਰ ਲਈ ਚਾਹ ਲੈ ਕੇ ਆਇਆ।

9. ਮਛੇਰਾ ਮੱਛੀਆਂ ਫੜ ਰਿਹਾ ਹੈ।

10. ਲੇਖਕ ਲੇਖ ਲਿਖ ਰਿਹਾ ਹੈ।

ਵਿਰੋਧੀ ਸ਼ਬਦ ਬਦਲ ਕੇ ਵਾਕ ਦੁਬਾਰਾ ਲਿਖੋ

1. ਦੁਕਾਨਦਾਰ ਇਮਾਨਦਾਰ ਵਿਅਕਤੀ ਹੈ।

2. ਫੇਲ ਵਿਦਿਆਰਥੀ ਗੈਰ ਹਾਜ਼ਰ ਸਨ।

3. ਇਹ ਕਮੀਜ਼ ਮਹਿੰਗੀ ਹੈ।

4. ਇਸ ਵਿੱਚ ਕੋਈ ਲਾਭ ਨਹੀਂ ਹੈ।

5. ਅੰਦਰ ਬਹੁਤ ਹਨੇਰਾ ਹੈ।

6. ਆਸਤਕ ਵਿਅਕਤੀ ਨਿਮਾਣਾ ਹੁੰਦਾ ਹੈ।

7. ਗਲਾਸ ਖਾਲੀ ਹੈ।

8. ਸਮਾਨ ਭਾਰਾ ਹੈ।

9. ਉਹ ਮੇਰਾ ਸਕਾ ਭਰਾ ਹੈ।

10. ਪੇਂਡੂ ਕੁੜੀ ਨੇ ਐੱਖਾ ਸਵਾਲ ਕੱਢਿਆ।

ਨੋਟ - ਸਾਰਾ ਕੰਮ ਸਾਫ਼ -ਸੁਥਰਾ ਅਤੇ ਸੁੰਦਰ ਲਿਖਾਈ ਵਿੱਚ ਕਰੋ।