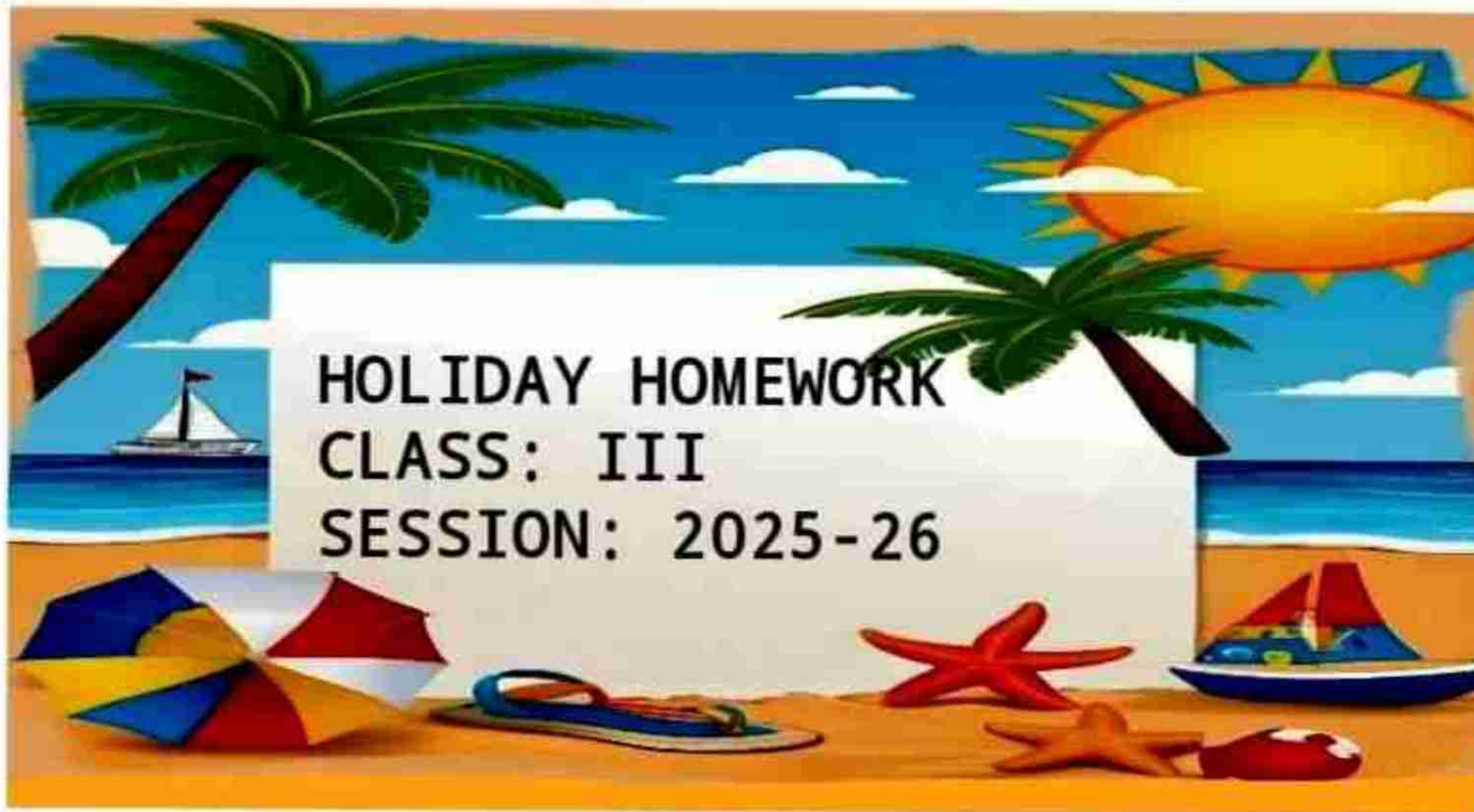




NANKANA SAHIB PUBLIC SCHOOL

AFFILIATED TO CBSE, AFF. NO.1630044



HOLIDAY HOMEWORK
CLASS: III
SESSION: 2025-26



**"THE HOLIDAY SEASON
IS A PERFECT TIME
TO REFLECT ON OUR BLESSINGS
AND SEEK OUT WAYS TO
MAKE LIFE BETTER
FOR THOSE AROUND US"**

'Exciting time is here! It's time for fun-filled activities.

Children are reservoirs of potential which needs to be tapped and channelized in diverse ways. We at NSPS feel that it is very important to fire their imagination and foster an outlook that helps them explore, discover and rediscover. Children should be encouraged to develop intellectually and physically. Summer Vacation is the best and fruitful time for learning and for nurturing creativity. It is the time when we can connect with our child in many ways. The designed Holiday Homework would not only enhance achievements of our children but also help to enhance family relationships. It would teach them to work independently and would improve their basic academic skills, such as reading, writing and spellings, and would help them develop personal skills and time management.



A few suggestions for the parents:



Spend quality time with your children and have fun time together.

- *Help the children to become independent by giving them responsibilities. Involve them in small household activities.*
- *Inculcate in them good manners, healthy habits and respect for elders.*



- *Converse with your children in English.*
- *Encourage your children to read books to enhance their language skills. Reading will also boost their interpretative skills and provide them valuable literary experience.*
- *Cultivate sportsmanship by encouraging your children to play various Indoor games.*
- *Remember that Summer Vacation is the time to relax and enjoy. So, spend these holidays creating a nurturing and stimulating environment filled with fun, frolic, learning and education.*
- *Have a family dinner every day.*
- *Play board games with your parents and sibling and show them who is the smartest.*
- *Spend some quality time with an elderly person in the family and ask them to share their childhood days.*



General Instructions for Students:

- Follow the instructions given carefully with each activity.
- You can take help of the internet, newspapers, magazines, encyclopedia to collect information and pictures.
- Make your activity sheets presentable and attractive.



**NANKANA SAHIB PUBLIC SCHOOL, GILL PARK,
LUDHIANA**

GRADE-3

☐Holidays Homework

Subject -English

☐ Academic Tasks

☐Do Passage Comprehensions Ex-1, 2, 3, 4 & 5 (pg-117 to 125)on book Grammar Bytes.

☐Make a beautiful chart on Pronouns using A4 size sheet and paste it on grammar side note book.

☐Do 1 page of cursive handwriting daily.(on separate notebook)

☐ Fun Activities☐

☐ Make a Greeting Card on *Father's Day* expressing your love and affection. (post the pics in class group on 15th June)



☐ Read any English newspaper daily and paste the
☐cutting of News Headlines atleast 20. (on scrap
notebook)

☐ Make a beautiful Family Tree and paste pics of
family members.(make it on A4 size sheet...hint is given
below)



☐ Learning Work

Revise the syllabus of Pt-2

☐L-2 (The Fortunate Pedlar)

❑ Poem -1 (I Meant to Do My Work Today)

❑ Nouns - Types, Number and Gender (ch-2 from Grammar Bytes.)

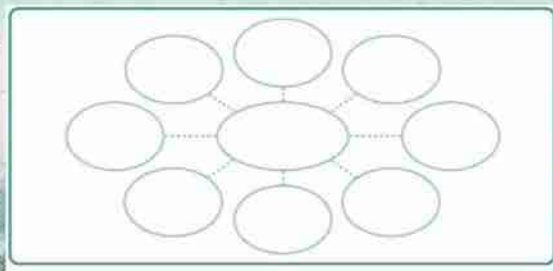
❑ Paragraph writing.

❑ **Art Integrated Activity** ❑

❑ **Make a Good Quality Poster**

Students have read about the various qualities the animals had ... in the chapter titled **How the Sun was Rescued.** Now think about your qualities and talents to fill the bubbles below with interesting facts about 'you'.

Use these facts to make a beautiful poster about yourself by sticking your photograph in the middle bubble.(use your creativity and make it colorful and impressive using A4 sheet)



I. Grammar Worksheet

I. Underline the proper noun and circle the common noun.

1. Reena has two brothers - Rahim and Sam.

2. Put the hat on your head .

II. Name the type of noun that the underlined word in each sentence represents.

1. There are beautiful flowers in the garden.

2. Mrs. Shah is our English teacher.

III. Fill in the blanks with the collective



noun.

1. My school has a huge _____ of books.(library/bouquet)


2. We saw a _____ of sheep in the field .
(pride/flock)

IV. Fill up the blanks with the most suitable noun.

1. She bought three _____(egg/eggs) from the market.

2. I got a _____ (star/stars)for my good handwriting.

V. Fill up the blanks with the plurals of the words given in the brackets.



1. I like eating _____(mango) and
_____ (orange)


2. She broke two _____ (tooth) when she
fell down.

**VI. Rewrite the following sentences after
changing the gender of the underlined
words.**

1. I love my sister.

2. The empress killed the tigress.

**II. Observe the picture carefully and answer the
questions.**



See the picture and answer the questions below.



Q1. How many swings are in the picture?

—

Q2. How many children are playing in the park?

—

Q3. What is the time on the clock?

—

Q4. Are the children enjoying in the picture?

—

Q5. Where can you sit in the park?

—

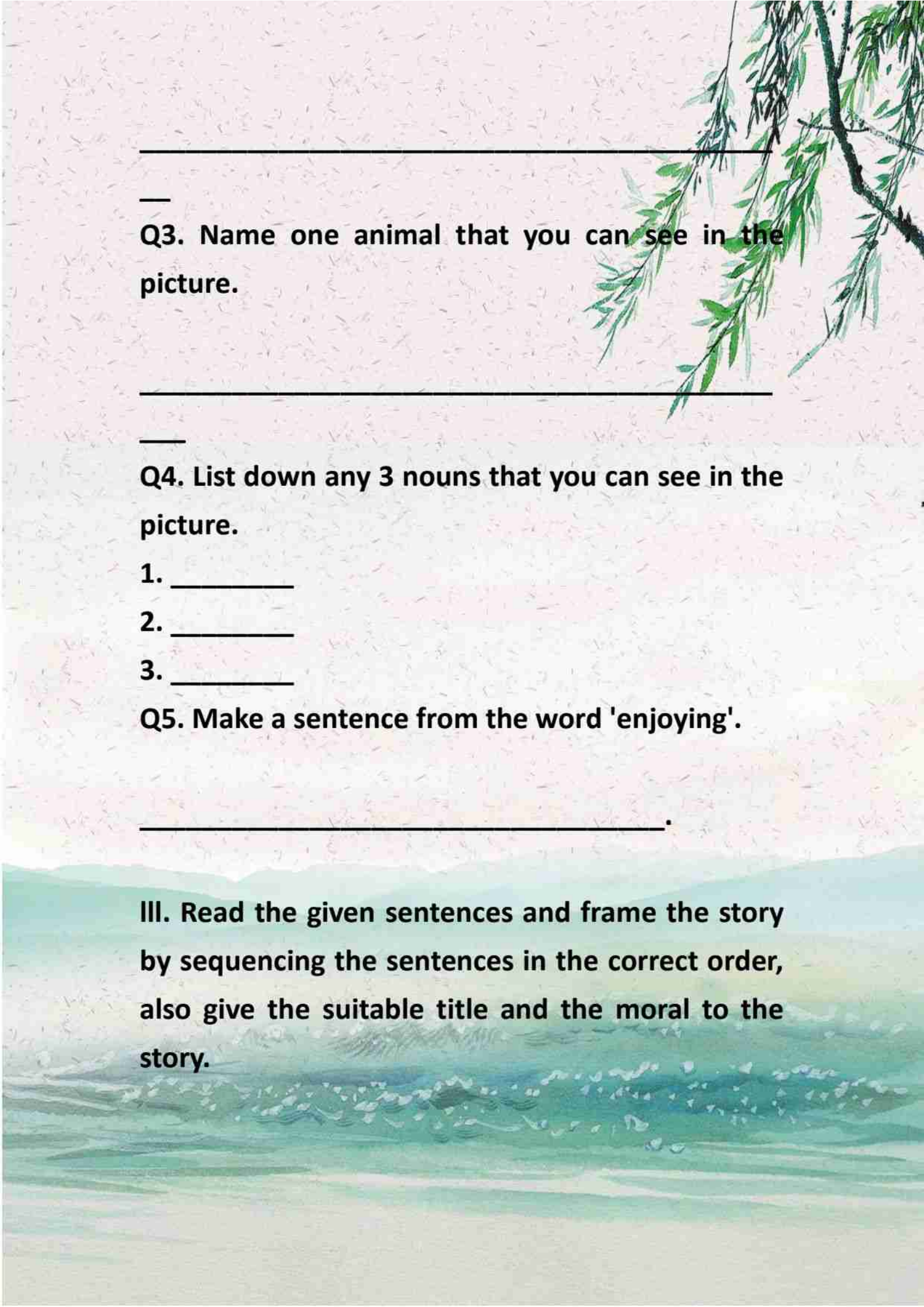
III. Observe the given picture to answer the questions.



Q1. What is this place?

—

Q2. Who are playing?



—

Q3. Name one animal that you can see in the picture.

—

Q4. List down any 3 nouns that you can see in the picture.

1. _____

2. _____

3. _____

Q5. Make a sentence from the word 'enjoying'.

_____.

III. Read the given sentences and frame the story by sequencing the sentences in the correct order, also give the suitable title and the moral to the story.



*** After sometime, a clever fox saw the crow with the bread. The fox praised the crow's voice and asked it to sing.**

*** Once there was a hungry crow. It was looking for food a day.**


*** Finally, the fox ran away happily.**

*** Then the crow found a piece of bread . It picked it up and flew to a tree.**

*** At the end, the crow felt very sad and realised its mistake.**

*** The foolish crow opened its mouth to sing. The bread fell down and the fox took it.**

Moral: _____



ਛੁੱਟੀਆਂ ਦਾ ਕੰਮ

ਵਿਸ਼ਾ- ਪੰਜਾਬੀ

ਜਮਾਤ- ਤੀਸਰੀ

ਯਾਦ ਕਰੋ ਅਤੇ ਲਿਖੋ:-ਪਾਠ -5,6,7 ਪ੍ਰਸ਼ਨ- ਉੱਤਰ ਅਤੇ ਅਭਿਆਸ ਕਾਰਜ (ਖ਼ਾਲੀ ਥਾਂਵਾਂ ,ਸ਼ਬਦ- ਅਰਥ,ਵਾਕ) ਦੀ ਲਿਖਤੀ ਦੁਹਰਾਈ ਕੀਤੀ ਜਾਵੇ।

ਗਿਣਤੀ (51-80) ਯਾਦ ਕਰੋ ਅਤੇ ਲਿਖੋ। (ਅਲੱਗ ਕਾਪੀ ਉੱਤੇ)

ਲਿਖਤੀ ਕਾਰਜ:-ਕੋਈ ਪੰਜ ਸੁਲੇਖ ਰਚਨਾਵਾਂ ਅਲੱਗ ਕਾਪੀ ਉੱਤੇ ਕਰੋ।

ਗਤੀਵਿਧੀ ਅਧਾਰਿਤ ਕਾਰਜ:-1.(ਰੇਲ ਨੰਬਰ 1-20) ਲਗਾਂ ਮਾਤਰਾਵਾਂ (ਮੁਕਤਾ, ਕੰਨਾ,ਸਿਹਾਰੀ, ਬਿਹਾਰੀ ਤੇ ਐਂਕੜ) ਨਾਲ ਸੰਬੰਧਿਤ ਫਲੈਸ਼ ਕਾਰਡ ਬਣਾਓ।

2.ਰੇਲ ਨੰਬਰ 21-41) ਲਗਾਂ ਮਾਤਰਾਵਾਂ(ਦੁਲੈਂਕੜ,ਲਾਂ,ਦੁਲਾਵਾਂ, ਹੋੜਾ ਅਤੇ ਕਨੇੜਾ) ਨਾਲ ਸੰਬੰਧਿਤ ਫਲੈਸ਼ ਕਾਰਡ ਬਣਾਓ ।

3.ਵਿਦਿਆਰਥੀ(ਰੇਲ ਨੰਬਰ1-20) ਲਿੰਗ ਬਦਲੇ ਨੂੰ ਦਰਸਾਉਂਦੀਆਂ ਤਸਵੀਰਾਂ ਚਾਰਟ(A4 size) ਉੱਤੇ ਲਗਾ ਕੇ ਨਾਂ ਲਿਖਣਗੇ।

4. ਵਿਦਿਆਰਥੀ(ਰੇਲ ਨੰਬਰ 21-41) ਵਚਨ ਬਦਲੇ ਨੂੰ ਦਰਸਾਉਂਦੀਆਂ ਤਸਵੀਰਾਂ ਚਾਰਟ(A4 size) ਉੱਤੇ ਲਗਾ ਕੇ ਨਾਂ ਲਿਖਣਗੇ।

5. ਸਾਰੇ ਵਿਦਿਆਰਥੀ ਟ੍ਰੈਫਿਕ ਲਾਈਟਾਂ ਅਤੇ ਆਵਾਜਾਈ ਸੜਕੀ ਚਿੰਨ੍ਹਾਂ ਨੂੰ ਚਾਰਟ (A4 size) ਉੱਤੇ ਬਣਾਉਣਗੇ ਅਤੇ ਰੰਗ ਭਰਨਗੇ।

ਤਸਵੀਰ ਵਰਨਣ: ਸਾਰੇ ਵਿਦਿਆਰਥੀ ਹੇਠਾਂ ਦਿੱਤੀ ਗਈ ਤਸਵੀਰ ਕਾਪੀ ਉੱਤੇ ਲਗਾ ਕੇ 10 ਸਤਰਾਂ ਵਿੱਚ (ਆਪਣੀ ਪੱਕੀ ਕਾਪੀ ਉੱਤੇ)ਤਸਵੀਰ ਵਰਨਣ ਕਰਨਗੇ।



ਪ੍ਰੋਜੈਕਟ ਕਾਰਜ:- ਸਾਰੇ ਵਿਦਿਆਰਥੀ (A4 ਸ਼ੀਟ ਉੱਤੇ) ਪੰਜਾਬ ਅਤੇ ਆਂਧਰਾ ਪ੍ਰਦੇਸ਼ ਦੀ ਤੁਲਨਾ ਕਰਦੇ ਹੋਏ ਇਹਨਾਂ ਦੇ ਪਹਿਰਾਵੇ ਸਬੰਧੀ ਤਸਵੀਰਾਂ ਲਾ ਕੇ ਨਾਮ ਲਿਖੋ।

ਨੋਟ :-ਸਾਰਾ ਕੰਮ ਸਾਫ਼ -ਸੁਥਰਾ ਅਤੇ ਸੁੰਦਰ ਲਿਖਾਈ ਵਿੱਚ ਕਰੋ।

ननकाना साहिब पब्लिक स्कूल, गिल पार्क लुधियाना। कक्षा तीसरी

ग्रीष्मकालीन अवकाशकार्य।

विषय-हिंदी

→ पाठ 3 और 4 के शब्दार्थ, प्रश्न-उत्तर और अभ्यास कार्य की दोहराई करो।

→ पेड़-पौधों से मिलने वाली चीजों के चित्र बनाकर उनके बारे में लिखिए।

फूल		
फल		

→ पानी के बचाव से संबंधित स्लोगन लिखकर पोस्टर बनाएं और उसे हिंदी की कॉपी पर पेस्ट करें।

→ गिनती के सही शब्द पहचान कर खाली बॉक्स में लिखें।

18	13	9	12	7
11	3	19	10	5
14	1	16	20	4
2	17	6	15	8

एक दो तीन चार पांच छः सात
आठ नौ दस ग्यारह बारह तेरह
चौदह पंद्रह सोलह सत्रह अठारह उन्नीस
बीस

→ Hindi Assignment

1. निम्नलिखित पद्यांश को पढ़कर प्रश्नों के उत्तर दीजिए:

पानी से ही है हरियाली, पानी से ही है खुशहाली।

पानी अगर नहीं बरसेगा, प्यासा हर जीव तरसेगा।

आज अगर पानी बचाओगे, कल को प्यास बुझा पाओगे।

इतना हम सब रख लें याद, भूलकर भी पानी न करें बरबाद।

क. हरियाली और खुशी किसमे है?

उत्तर. _____

ख. प्यासा जीव किसके लिए तरसेगा?

उत्तर. _____

ग. समान तुक/तुकांत शब्द लिखे 'बरसेगा'

उत्तर. _____

2. निम्नलिखित प्रश्नों के उत्तर लिखिए:

क. पानी की ज़रूरत कब पड़ती है

उत्तर. _____

ख. पड़ोसी से झगड़ा क्यों नहीं करना चाहिए ?

उत्तर _____

ग. चींटी और हाथी में झगड़ा क्यों नहीं हुआ ?

उत्तर _____

घ. एकता में क्या शक्ति होती है ?


उत्तर. _____

3. शब्दों का उचित अर्थ के साथ मिलान कीजिए

क	ख
i. बेकार	सहायता <input type="radio"/>
ii. बर्बाद	जल्दी ही <input type="radio"/>
iii. मदद	समझौता <input type="radio"/>
iv. तुरंत	नष्ट <input type="radio"/>
v. सुलह	बिना कार्य के <input type="radio"/>

4. सही शब्द के आगे सही (✓) का निशान लगाए

क. पशु पक्षी और पेड़-पौधे भी पानी पीते हैं। ()



ख. पड़ोसी कभी काम नहीं आते। ()

ग. पड़ोसी ही सबसे अच्छा मित्र होता है। ()

5. अशुद्ध शब्दों को शुद्ध करके लिखिए।

धोका _____

झूट _____

प्रान _____

6. दिए गए चित्र को देखकर प्रश्नों के उत्तर दीजिए-

प्रश्न: चित्र में किसका दृश्य दिखाया जा रहा है?

उत्तर: _____

प्रश्न: बच्चे किसके साथ पार्क में आए हैं?

उत्तर: _____

प्रश्न: पिंजरे में कौन-कौन से जानवर हैं?

उत्तर: _____

प्रश्न: पिंजरे में कौन-कौन से पक्षी हैं?

उत्तर: _____

हिंदी का संपूर्ण ग्रीष्मकालीन अवकाशकार्य Hindi fair notebook पर पेस्ट करें।

(A) Fill in the blanks :

1. Smallest 2 digit number is _____.
2. Write the missing number 1573____, 1575
3. What comes just after 5689 _____?
4. The standard form of $6000+50+9$ is _____.
5. Odd numbers end up with _____.
6. The result of addition is called _____.
7. The numbers to be added are called _____.
8. The result of addition is called _____.
9. The number to be subtracted is called _____.
10. Multiplication is also called repeated _____.
11. The answer of the multiplication is called _____.
12. $4567 + \underline{\hspace{1cm}} = 4568$
13. $5642 - 5642 = \underline{\hspace{1cm}}$
14. $8721 + 0 = \underline{\hspace{1cm}}$
15. $2370 - \underline{\hspace{1cm}} = 2370$

(B) Answer the following questions

1. Write the following numbers in words:
(i) 7183 - (ii) 1097-
2. Write in numerals.
(i) Two thousand twelve -
(ii) Nine thousand nine hundred fifty nine-
3. Count forward and write the next four numbers.
(i) 4576, _____, _____, _____, _____
(ii) 7823, _____, _____, _____, _____
4. Count backward And write the next five numbers .
(i) 4326, _____, _____, _____, _____, _____
(ii) 1238, _____, _____, _____, _____, _____
5. Write the place value and face value of the underline digit:
a. $56\underline{7}8$ - b. $89\underline{0}5$ -
6. Draw and represent 4-digit number 6123 on abacus.
7. Write the following numbers in expanded form: (a) 3146. (b) 5789
8. Write the standard numerals for the following: (i) $2000+ 60+7$ (ii) $4000+100+40+7$
9. Write the successor of the following numbers: (a) 8790. (b) 5648
10. Write the predecessor of the following numbers: : (a) 5609 (b) 4566
11. Write the following numbers in ascending order and descending order:
(a) 6428, 4139, 8172, 4193
(b) 7436, 7634, 6734, 6473
12. Take the even number and circle the odd number: 6075, 9020, 6710, 1877, 3579

13. Find the sum.

(a) $2387 + 4156$. (b) $5689 + 1347$

(c) $4566 + 1345 + 1002$ (d) $5678 + 1309 + 4581$

(e) 6 thousands 4 hundreds 2 tens 6 ones and 7 thousands 3 hundreds 5 tens 2 ones

14. Estimate the sum to the nearest 10's and 100's by first rounding of the numbers:

(a) $2567 + 3459$. (b) $1422 + 1006$

15. Subtract and check your answer:

(a) $3678 - 3259$. (b) $1472 - 349$

16. Solve the following:

(a) $4169 + 350 - 2173$

(b) $7689 + 345 - 5678$

17. Estimate the difference by first round of the numbers to the nearest 10's :

(a) $2435 - 1235$. (b) $6212 - 3256$

18. Write the product :

(i) $5 \times 8 = \underline{\hspace{2cm}}$. (iii) $10 \times 3 = \underline{\hspace{2cm}}$

(ii) $9 \times 4 = \underline{\hspace{2cm}}$. (iv) $6 \times 7 = \underline{\hspace{2cm}}$

19. Multiply the following.

a. 23×42 . b. 446×18

c. 26×15 . d. 2234×3

20. Solve the following:

- In a sports club 2015 children like to play cricket and 1437 children like to play tennis. How many children like to play cricket and tennis ?
- There were 2700 ducks in a farm. By June 520 ducks died. By December 645 more ducks were born. How many ducks were there in the farm in December ?
- 4600 people went to the fair. 1986 people left early. How many people were still at the fair?
- What must be added to 4662 to get 7966 ?
- Form smallest and the largest four digit number using the digits 6, 1, 5 and 3 also. find the difference between them.

21. Fill in the blanks :

a. $40 \times \underline{\hspace{2cm}} = 1600$ b. $13 \times 200 = \underline{\hspace{2cm}}$

c. $678 \times 1 = \underline{\hspace{2cm}}$. d. $65 \times 34 = \underline{\hspace{2cm}} \times 65$

e. $39 \times 0 = \underline{\hspace{2cm}}$. f. $56 \times \underline{\hspace{2cm}} = 56$

g. $23 \times 100 = \underline{\hspace{2cm}}$ h. $79 \times 1000 = \underline{\hspace{2cm}}$

22. Learn and write tables from 2 to 15.

Name: _____ Date: _____

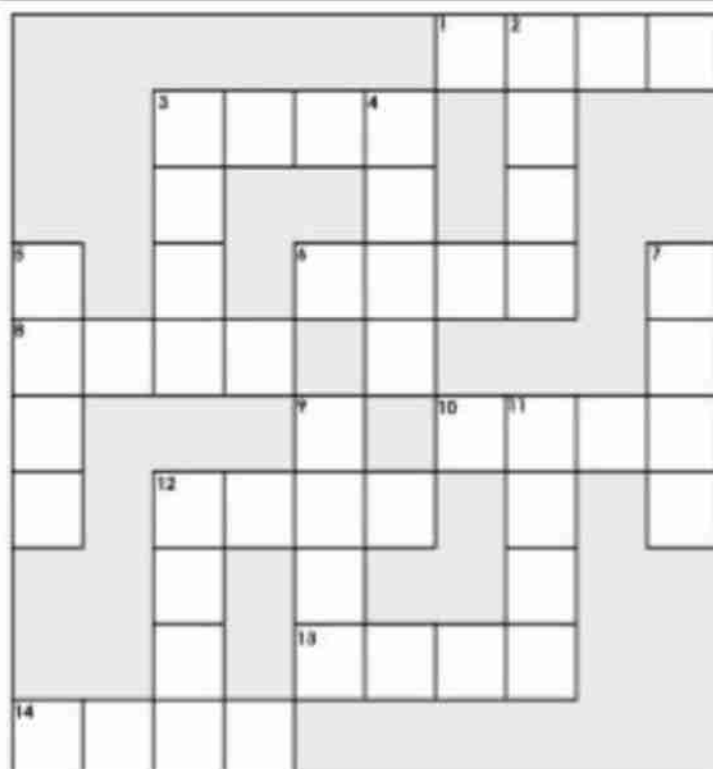
Circle the correct number.

3 tens 4 ones	<u>34</u> 56 43	5 hundreds 6 tens 1 ones	561 651 165
2 hundreds 5 tens 9 ones	295 259 290	0 hundreds 9 tens 6 ones	960 96 69
4 hundreds 0 tens 4 ones	440 444 404	1 hundred 5 tens 3 ones	135 153 53
9 hundreds 8 tens 3 ones	938 893 983	8 hundreds 8 tens 0 ones	800 808 880
5 hundreds 6 tens 1 ones	561 615 516	7 hundreds 9 tens 5 ones	597 795 759

Find the differences to the subtraction problems to complete the math crossword.

Name: _____

Subtraction Math Crossword



ACROSS

1.
$$\begin{array}{r} 7,007 \\ -3,586 \\ \hline \end{array}$$

10.
$$\begin{array}{r} 2,165 \\ -365 \\ \hline \end{array}$$

3.
$$\begin{array}{r} 9,622 \\ -2,719 \\ \hline \end{array}$$

12.
$$\begin{array}{r} 8,757 \\ -5,788 \\ \hline \end{array}$$

6.
$$\begin{array}{r} 5,742 \\ -3,153 \\ \hline \end{array}$$

13.
$$\begin{array}{r} 5,069 \\ -3,368 \\ \hline \end{array}$$

8.
$$\begin{array}{r} 8,744 \\ -1,008 \\ \hline \end{array}$$

14.
$$\begin{array}{r} 9,379 \\ -3,904 \\ \hline \end{array}$$

DOWN

2.
$$\begin{array}{r} 6,335 \\ -2,076 \\ \hline \end{array}$$

7.
$$\begin{array}{r} 8,663 \\ -3,659 \\ \hline \end{array}$$

3.
$$\begin{array}{r} 7,001 \\ -828 \\ \hline \end{array}$$

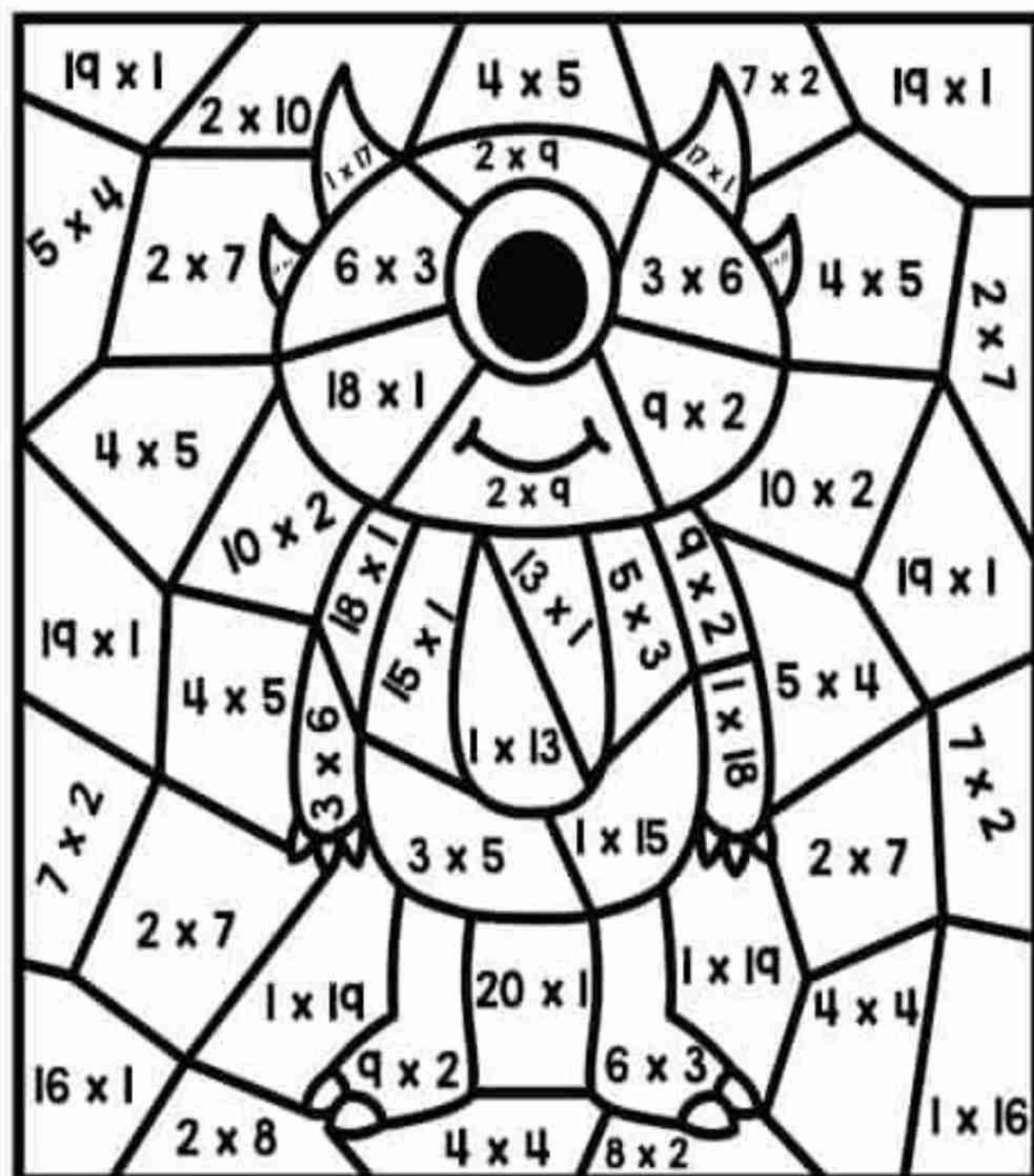
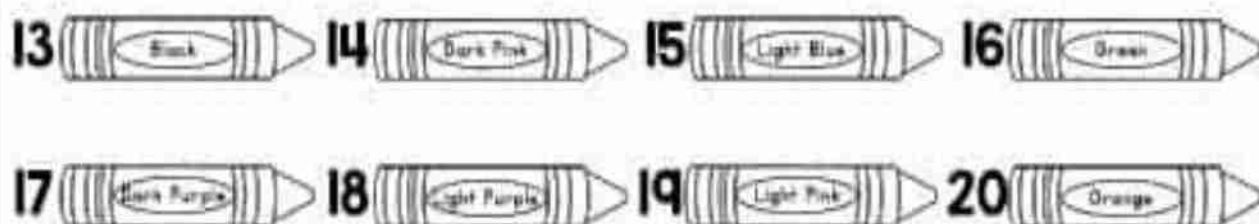
9.
$$\begin{array}{r} 9,262 \\ -2,641 \\ \hline \end{array}$$

4.
$$\begin{array}{r} 9,034 \\ -5,984 \\ \hline \end{array}$$

11.
$$\begin{array}{r} 8,798 \\ -527 \\ \hline \end{array}$$

5.
$$\begin{array}{r} 9,798 \\ -8,006 \\ \hline \end{array}$$

12.
$$\begin{array}{r} 9,981 \\ -7,124 \\ \hline \end{array}$$





Holiday Homework

Class : 3rd. Subject : Science .

(1) Learn Chapter 3,4 for next Periodic Test.

(2) Life of an Astronaut:- Write a short paragraph about what astronauts do. Draw or paste a picture of an astronaut in a space suit.

(3) There are specialist doctors for the treatment of different organs of your body. Use the internet to find out what they are called:-

For (1) Eyes (2)Ears. (3) Nose and throat (4) Heart (5). Bones.

(4) Take a waste bottle or any jar cut it, colour and decorate it and plant a sapling in it. Take care of the plant and bring it to class when school reopens.

5) Prepare a model (working) for the given topic according to your

Roll numbers.

Roll no. 1- Solar Eclipse working model.

Roll no. 3- Circulatory system

Roll no. 5- Skeletal system

Roll no. 7- Layers of Earth

Roll no. 9- Global warming

Roll no. 11: Lunar eclipse working model

Roll no. 13- Excretory system

Roll no. 15 : Structure of teeth (clay model)

Roll no. 17- Model of photosynthesis

Roll no. 19: life cycle of butterfly.

Roll no. 21: Phases of moon

Roll no. 23: Water cycle

Roll no. 25 : Working model of balanced diet

Roll no. 27: 3D model of save planet.

Roll no. 29: Working model of lightning and thunderstorm

Roll no. 31: Model of earthquake

Roll no. 33: Escalator working model

Roll no. 35: Rainwater harvesting model

Roll no. 37: Solar system model

Roll no. 39: Seed germination model

Roll no. 41: Save Environment model

Roll no. 43: Animal pyramid working model

Roll no 45: Digestive system

**NOTE- AVOID USING THERMOCOL IN MODEL MAKING, OTHERWISE
YOUR MODEL WILL NOT BE CONSIDERED.**

6) Prepare a chart according to roll numbers on A4/A3 sheet.

Roll no.: 1 to 3: Life cycle of honey bee(By using clay)

Roll no.: 4 to 6 : Life cycle of silkworm (By using clay)

Roll no.: 7 to 9 : Process of formation of cotton from cotton plant.

Roll no.: 10 to 12: Paste pictures of terrestrial plants.

Roll no.: 13 to 15: Muscular system

Roll no.: 16 to 18: Nervous system

Roll no.: 19 to 21: Paste pictures of different types of plants.

Roll no.: 22 to 24: Paste pictures of animal habitats : Desert , Forest , aquatic and polar

Roll no.: 25 to 27: Life cycle of a plant

Roll no.: 28 to 30 : States of matter

Roll no : 31 to 33 : Pictures of things around us (Living and non - living)

Roll no.: 34 to 36 : Layers of Soil.

**Roll no.: 37 to 39 : Paste pictures of Biodegradable and non biodegradable waste in
separate column (A3 sheet).**

Roll no 40 -42 and onwards : Save Water .

Holiday Homework Assignment

Subject : Science .

Solve the given Assignment and paste it on your fair notebook.

Read the following Paragraph and answers the given questions.

A) We see many things around us. Some are hard like a chair or a rock. These are called solids. They have a shape of their own. Water, milk, and juice are liquids. They can flow and take the shape of the container. Air is a gas. We cannot see it, but we can feel it. Gases spread all around us. Everything we see is made of matter. Matter is anything that has mass and takes up space. Matter can be a solid, liquid, or gas.

Q1. Name two examples of solids.

Ans: 1. _____ 2. _____.

Q2. Define matter.

Ans : _____.

Q3. Fill in the blank.

a) Liquids take the _____ of the container.

Q4. True / False

a) Milk is a liquid. (_____)

b) Matter can be solid, liquid, or gas. (_____)

B) The respiratory system helps us to breathe. We breathe in air through our nose. The air passes through the wind pipe and goes into the lungs. In the lungs, the body takes in oxygen from the air and gives out carbon dioxide. This process is called respiration. Oxygen is very important for us to live. We breathe out carbon dioxide, which is a waste gas.

Q1. Which gas is important for us to live?

Ans - _____.

Q2. Name the gas we breathe out.

Ans: _____.

Q3. Fill in the blanks:-

a) The respiratory system helps us to _____.

b) The air passes through the windpipe and goes into the _____.

Q4. True / False

a) We breathe through our ears. (_____)

b) We breathe out carbon dioxide, which is a waste gas. (_____)

C. People wear clothes to cover their bodies and protect themselves from the weather. We wear cotton clothes in summer because they keep us cool. In winter, we wear woollen clothes to stay warm. During the rainy season, we use raincoats and umbrellas to keep ourselves dry. Clothes also make us look neat and tidy.

Q1. Why do people wear clothes?

Ans : _____.

Q2.What type of clothes do we wear in summer?

Ans: _____.

Q3 Fill in the blanks .

- a) In _____ we wear woollen clothes to stay warm.
- b) During the rainy season, we use _____ and umbrellas to keep ourselves dry.

Q4 True / False .

- a) Clothes make us look neat and tidy. (_____)

D) We should keep our house neat and clean to stay healthy and happy. We must sweep the floor every day and throw garbage in the dustbin. We should keep things in their proper places and clean the windows and doors regularly. Dirty houses can make us sick and attract flies and germs. A clean house looks beautiful and keeps the family safe from diseases.

Q1. Why should we keep our house clean?

Ans: _____.

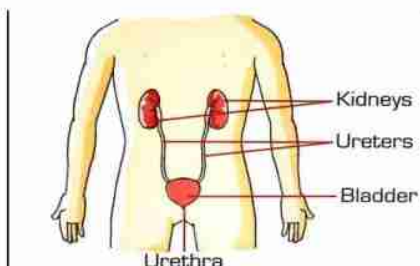
Q2. Fill in the blanks:

- a). We must sweep the _____ every day.
- b) Dirty houses can make us _____ and attract flies and germs.

Q3.True /False

- a)We should keep things in their proper places. (_____)
- b)Clean houses look beautiful. (_____)

E . PICTURE COMPOSITION.(See the picture and answers the following questions.)



Q1 .Name the system shown in the picture.

Ans: _____.

Q2 Name the different parts of this system.

Ans : _____.

Q3.Fill in the blanks .

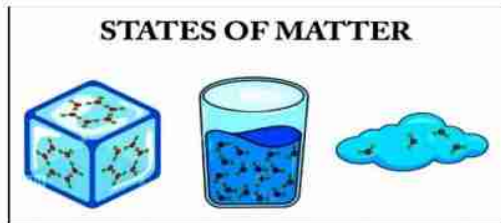
a) There are _____ kidneys in the body.

b) The _____ stores urine.

Q4. True / False

a) The skin helps remove urine from the body. (_____)

F. Picture composition. (See the picture and answers the following questions.)



Q1. Name the three states of matter shown in the picture.

Ans: _____.

Q2. In which state do particles move freely?

Ans: _____.

Q3. Which state of matter is shown using a cloud?

Ans: _____.

Q4. Fill ups :-

a) Ice is an example of _____ state.

Q5. True or False:

a) Liquids have a fixed shape. (_____)

NANKANA SAHIB PUBLIC SCHOOL, GILL PARK LUDHIANA

HOLIDAYS HOME WORK Grade-3

SUBJECT - SOCIAL SCIENCE

A. Learning Work

L-3 The Earth and it's Neighbours

L-4 Air Around Us

Learn both chapters for Weekly Test.

**B. Make a Model According to given Topic (Roll Number Wise)
(Thermocol is not allowed)**

Topic	Roll Number
• Means of Transport	2 and 36
• Means of Communication	4 and 38
• Globe	6 and 40
• Solar System	8
• Water Cycle	10
• Air Pollution	12
• Water Pollution.	14
• Make a Scene of Desert	16
• The Himalayan Range	18
• Invention of Wheel.	20
• Our helpers.	22
• Rotation of Earth.	24
• Revolution of Earth.	26
• Village Scene.	28
• Any one harvest festival.	30
• Any one religious festival.	32
• Different Landforms.	34

C. Make a Chart According to the given topic.

• Rainwater harvesting	(1-13)
• Draw or Paste Pictures of different food items	(14-26)
• Rainwater harvesting.	(27 onwards)

D. PROJECT WORK

- Plants help keep the air clean. Grow plants whenever you can. Do you have old worn-out pair of shoes that you no longer wear. Take help from your elders and turn your old pairs of shoes into beautiful shoes house planter.

- E. Learn the Names of all states and their Capitals and locate them in India's Political Map.
- F. Solve the following assignment after learning the chapters.

ASSIGNMENT L-3,4,5

A. Multiple Choice Question Answer

1. The Sun is not a _____.
a. planet b. a big ball of fire c. a star
2. _____ is the hottest planet.
a. Venus b. Mars c. Jupiter
3. Planets move around the _____.
a. Moon b. Earth c. Sun.
4. We can only _____ air.
a. Taste b. feel c. touch
5. It is very cold places, water is present in the form of _____.
a. gas b. liquid c. snow
6. The water on the earth is present in _____ natural forms.
a. three b. two c. five
7. When water is frozen, it is in the _____ state.
a. solid b. liquid c. gas
8. The _____ of the earth's surface is covered with water.
a. $\frac{3}{4}$ b. $\frac{1}{4}$ c. $\frac{1}{2}$

B. FILL IN THE BLANKS

1. _____ is the most important source of water.
2. The process of collecting and storing _____ water is called rainwater harvesting.
3. Rain water fills the areas on the ground such as rivers and _____.
4. Air has _____.
5. _____ forms about 78 percent of the earth's atmosphere.
6. Planets have no _____ of their own.
7. Besides the sun and the planets, the solar system consists of moons, _____ and comets.
8. The earth moves around the sun it it's fixed _____.

TRUE/FALSE

1. The moon is the earth's nearest neighbour.
2. Jupiter is the hottest planet.
3. Moon is the earth's natural satellite.
4. The earth is the fourth planet from the sun.
5. Air has no weight.
6. Air takes up space and gives shape to things.
7. We must not let water overflow from bucket while bathing.

MATCH THE COLUMNS

- | | |
|-----------------------|----------------------------------|
| 1. Water cycle | a. Early morning hours |
| 2. Water on the earth | b. Mass of Ice |
| 3. Cleanest air | c. Three-fourth |
| 4. Nitrogen | d. The third planet from the sun |
| 5. Asteroids | e. Causes rains |
| 6. Comets | f. 78 percent |
| 7. The earth | g. Pieces of rocks and metals |

NAME THE FOLLOWING

1. Which planet is called the red planet? _____
2. Which planet supports life? _____
3. The layer of air around earth. _____.
4. It is the gaseous form of water. _____
5. It fills the areas on the ground such as rivers and canals. _____
6. It is a mixture of gases like nitrogen, oxygen and carbon dioxide. _____.

ANSWER THE FOLLOWING QUESTIONS .

Q1 Explain the sources of water?

Ans _____

Q2 Why is the earth called 'blue planet'?

Ans _____

Q-3 What is air made of?

Ans _____

Q-4 Write the different properties of air.

Ans _____

Q-5 What does the solar system consists of?

Ans _____

Q-6 What are asteroids and comets?

Ans _____

Nankana Sahib Public School

Holidays Homework

Subject –Computer

Class-3rd

A) Fill the correct option:

1. _____ means to calculate or count.
a. Compute b. System c. Computer System
2. Software is mainly of _____ types.
a. Four b. three c. two
3. By default, the text is aligned to _____ in writer.
a. left b. center c. right
4. _____ provides many unique and decorative text styles.
a. Formatting b. Text Art c. Wrapping
5. _____ means to change the appearance of text to make it stand out.
a. Formatting b. Text art c. Editing

B) Write the shortcut keys of the following:

1. To Print a document _____
2. To Left-Align the text _____
3. To Right-Align the text _____
4. To Center-Align the text _____
5. To open Thesaurus _____

C) Fill in the blanks:

1. _____ operating system software is available free of cost.
2. A computer _____ the data as per requirement or instructions.
3. The _____ wavy lines shows the spelling mistakes.
4. _____ is a list of words grouped together containing synonyms and antonyms.
5. A _____ is a dot or a symbol used to display text points in an unordered manner.

D) Answer the following questions:-

1. Write any four characteristics of computer.

Ans. _____

2. How are spellings mistakes identified in Writer?

Ans. _____

E) Rewrite the jumbled letters:

_____	MSEOU
_____	ROITONM
_____	DRABOEKY
_____	PUC
_____	ARDHRAEW

F) Find the names of the pictures :-

ACTIVITY



Identify the following pictures and find their names in the word grid.



P	R	I	N	T	E	R	M
A	Q	I	L	W	H	R	O
Y	P	Y	X	M	J	S	N
T	F	C	P	U	N	S	I
C	M	B	T	P	U	T	T
Z	N	M	G	S	H	J	O
X	M	O	U	S	E	L	R
S	P	E	A	K	E	R	S
K	E	Y	B	O	A	R	D



G) Match the following:-

1.CPU	
2.MOUSE	
3.JOYSTICK	
4.KEYBOARD	
5.MONITOR	
6.TABLET	
7.SCANNER	

Computer Parts

DIRECTIONS: Circle the name of each item.

1.



hard drive

printer

2.



monitor

mouse


3.



mouse

monitor

4.



printer

circuit board

5.



disc drive

keyboard

6.



printer

disc drive

7.



mouse

CD