



**NANKANA SAHIB
PUBLIC SCHOOL**

AFFILIATED TO CBSE, AFF. NO.1630044

SUMMER HOLIDAY HOME WORK



GRADE : 4
SESSION : 2026-27



A few suggestions for the parents:

- Spend quality time with your children and have fun time together.
- Help the children to become independent by giving them responsibilities. Involve them in small household activities.
- Inculcate in them good manners, healthy habits and respect for elders.
- Converse with your children in English.
- Encourage your children to read books to enhance their language skills. Reading will also boost their interpretative skills and provide them valuable literary experience.
- Cultivate sportsmanship by encouraging your children to play various Indoor games.
- Remember that Summer Vacation is the time to relax and enjoy. So, spend these holidays creating a nurturing and stimulating environment filled with fun, frolic, learning and education.
- Have a family dinner every day.
- Play board games with your parents and sibling and show them who is the smartest.
- Spend some quality time with an elderly person in the family and ask them to share their childhood days.

**“THE HOLIDAY SEASON
IS A PERFECT TIME
TO REFLECT ON OUR BLESSINGS
AND SEEK OUT WAYS TO
MAKE LIFE BETTER
FOR THOSE AROUND US.”**

‘Exciting time is here! It’s time for fun-filled activities.

Children are **reservoirs of potential** which needs to be tapped and **channelized** in diverse ways. We at NSPS feel that it is very important to **fire their imagination** and foster an outlook that helps them **explore, discover and rediscover**. Children should be encouraged to develop **intellectually** and **physically**. Summer Vacation is the best and fruitful time for learning and for nurturing creativity. It is the time when we can connect with our child in many ways. The designed **Holiday Homework** would not only enhance achievements of our children but also help to enhance **family relationships**. It would teach them to work independently and would improve their basic academic skills, such as **reading, writing and spellings**, and would help them develop **personal skills and time management**.

General Instructions for Students:

- Follow the instructions given carefully with each activity.
- You can take help of the internet, newspapers, magazines, encyclopedia to collect information and pictures.
- Make your activity sheets presentable and attractive.

**Happy
Summer Holidays!**



NANKANA SAHIB PUBLIC SCHOOL

AFFILIATED TO CBSE, AFF. NO.1630044

Holiday Home work

Grade : 4th Subject: Science Session: 2026-27

Part - A (Work sheet)

Instructions:- Solve and paste the assignment in Science fair Notebook

1. Picture Study :-

Look at the following picture and answer the question.



Q1.MCQ:

The young one of a hen is called:

- a) Puppy. b) Chick. c) Kid

Q2.True/False:

Chicks hatch from eggs. _____

Q3.Fill in the blank:

A hen keeps its babies warm under its _____.

Q4.One word answer:

Name the home of a hen. _____

Q5.How does a hen protect its chicks?

Ans:

2. Look at the following picture and answer the questions.



Q1.MCQ:-

A camel is called the ship of the:

a) Forest. b) Desert. c) Ocean

Q2.True/False:

Camels can survive for many days without water. _____

Q3.Fill in the blank:

A camel has broad _____ to walk easily on sand .

Q4.One word answer:

Name the body part where camel stores fat.

Q5. How do camels protect their eyes in sandstorm?

Ans :-

3. Look at the following picture and answer the questions.



Q1.MCQ.

A balanced diet contains:

- a) Only sweets b) All nutrients c) Only fruits

Q2.True/False:

A balanced diet helps us stay healthy and active. _____

Q3.Fill in the blank:

Milk helps to make our bones and _____ strong.

Q4.One word answer:

Name the nutrient needed for body building. _____

Q5.Why should we eat a balanced diet?

Ans:-

Case Based questions:-

1.Rohan saw a small puppy near the park. It looked hungry and scared. He gave the puppy water and some food. He also called an animal helper to take care of it.

Read the case carefully and answer the following questions:

Q1.MCQ:-

Which life skill did Rohan show?

- a) Carelessness. b) Kindness. c) Anger

Q2. True/False:

We should help animals in need. _____

Q3.Fill in the blank:

Animals also need love and _____.

Q4.One word answer:

Name the person who helps injured animals. _____

Q5.What should we do when we see an animal in need?

Ans :

Case Based Questions:-

2.Aman saw monkeys and squirrels climbing trees in a park. He learned that these animals live mostly on trees and use their strong claws and limbs for climbing. Aman understood that trees are important homes for many animals.

Read the case carefully and answer the following questions:

Q1.Which body part helps monkeys climb trees easily?

a) Fins b) Claws c) Horns

Q2.True/False:

Trees provide shelter to many animals. _____

Q3.Fill in the blank:

Squirrels and monkeys move from one branch to another with the help of their strong _____.

Q4.One word answer:

Name the place where monkeys mostly live. _____

Q5.Why are trees important for arboreal animals?

Ans :-

Case based Questions:-

3.Rohan spent many hours sitting in the wrong posture while watching T.V. and using the computer. After some days, he started feeling pain in his back. His teacher advised him to sit straight, exercise daily and take proper rest.

Read the case carefully and answer the following questions:

Q1.MCQ.

Rohan was feeling pain because of:

- a) Correct posture b) Incorrect posture c) Healthy habits

Q2.True/False:

Daily exercise helps us stay healthy and active. _____

Q3.Fill in the blank:

We should sit in a _____ posture.

Q4.One word answer:

Name one activity that keeps us fit. _____

Q5.Why is proper rest important for our body?

Ans:

Q6. Which good habit should we follow to keep our body healthy?

Ans:

One word questions:-

1.Name the process in which a caterpillar changes into a butterfly.

2.What is the young cockroach called?


3.Name the stage before a butterfly becomes an adult.

4.Name the body covering of a polar bear.

5. Name the body part that helps fish to breathe.
6. I am at tadpole, I undergo a process to become like my parents. What is that process?
7. Name the thick layer under the skin of polar bears.
8. Which mineral helps make bones and teeth strong?
9. Land animals that live mostly on trees are known as _____.
10. The floating cluster of frog eggs is known as the _____.
11. I was once present on Earth but now I am impossible to find.
12. I have very strong legs. Therefore, I can save myself from enemies by running very fast.
13. Sitting on leaves help me camouflage from enemies.
14. Name the oldest method of food preservation.
15. I am a water mammal and I come to the surface to breathe through this organ. What is the name of this organ?
16. You can find me inside an egg and I am a rich source of protein.

Diagram based questions:-

1. Draw and label the structure of an egg.
2. Label the following diagram.



1. Complete your notebook: L-1,2,3,4,5
2. Prepare lesson 4, 5 for PT-2 (Do written Practice)
3. "A Day at the Zoo" – Picture Collage Activity

Visit a zoo and observe different animals and birds carefully. Collect or click pictures during your visit and make a beautiful collage by pasting them neatly on a A-4 sheet.

4. Life Skill Activity: "Be Kind to Animals" Campaign.

Observe the animals and birds around you for one week. Make an A4 sheet/chart showing 5 ways we can help animals survive safely.

You may include:

- Keeping water for birds
- Feeding stray animals
- Protecting trees • Not hurting animals
- Keeping surroundings clean

Draw or paste related pictures and write 1-2 lines for each point. (Reference picture)

BE KIND TO ANIMALS CAMPAIGN

1. KEEP WATER FOR ANIMALS
2. FEED STRAY ANIMALS
3. PROTECT TREES
4. DON'T HURT ANIMALS
5. KEEP SURROUNDINGS CLEAN
6. SPREAD LOVE AND CARE

MESSAGE:

5. Make models according to your roll number .

The following instructions must be followed:•

The model should be neat, creative, and well-presented.

Use eco-friendly and easily available materials.

Avoid the use of thermocol.

Students should be able to explain their model clearly.

Note:- Participation is mandatory for students as this activity carries weightage in the internal assessment.

Roll number	Model
1	Wheel Model on Deficiency disease
3	Save planet 3D Model
5	Rain water harvesting
7	Respiratory system model
9	Teeth clay model(Art integrated)
11	States of matter (3D model)
13	Water cycle
15	Working model on earth, sun and moon system(Rotation and Revolution)
17	Phases of moon
19	Solar Eclipse
21	Day / Night working model
23	Global warming model
25	Photosynthesis
27	Lunar Eclipse
29	Life cycle of butterfly(art integration)
31	ATM machine
33	Vaccum cleaner or Air Pollution
35	Wind mill or Food chain

37	Seed Germination
39	Volcano Formation
41	Simple Machines
43	Electric Circuit

6. Make chart according to your roll numbers. On A-4 sheet or A-3 Sheet .

Roll numbers	Chart
1 to 7	Balanced diet
8 to 14	Types of teeth
15 to 21	Structure of tooth
22 to 35	Digestive system
36 to 43	Deficiency diseases



NANKANA SAHIB PUBLIC SCHOOL, GILL PARK, LUDHIANA

ENGLISH HOLIDAYS HOMEWORK

CLASS – IV

- 1. Attempt Assessment Papers I,II on Grammar Mission pgs. 127,128,131,132.**
- 2. Select 5 newspaper articles on current events and summarize each briefly, highlighting key nouns and pronouns. Create a beautiful sheet featuring the summary and also give a catchy caption to each summary.**
- 3. Do you know that 8th June is celebrated as World Ocean Day every year? Create a beautiful collage showing ocean marine life like coral reefs, fish, underwater plants etc.**
- 4. Learn these Forms of Verbs:**

V1	V2	V3
be	was, were	been
beat	beat	beaten
become	became	become
begin	began	begun
come	came	come
cost	cost	cost
cut	cut	cut
dig	dug	dug
do	did	done
draw	drew	drawn
drive	drove	driven
drink	drank	drunk
eat	ate	eaten
fall	fell	fallen
feel	felt	felt
fight	fought	fought
find	found	found
fly	flew	flown
forget	forgot	forgotten
forgive	forgave	forgiven
freeze	froze	frozen
give	gave	given
go	went	gone
grow	grew	grown
hang	hung	hung
have	had	had
hear	heard	heard
hide	hid	hidden
hit	hit	hit
hold	held	held
hurt	hurt	hurt

V1	V2	V3
keep	kept	kept
know	knew	known
lay	laid	laid
lead	led	led
leave	left	left
lend	lent	lent
lie	lay	lain
lose	lost	lost
make	made	made
ride	rode	ridden
ring	rang	rung
rise	rose	risen
run	ran	run
say	said	said
see	saw	seen
sell	sold	sold
sink	sank	sunk
sit	sat	sat
sleep	slept	slept
speak	spoke	spoken
spend	spent	spent
stand	stood	stood
swim	swam	swum
take	took	taken
teach	taught	taught
tear	tore	torn
tell	told	told
wake	woke	woken
wear	wore	worn
win	won	won
write	wrote	written

5. Vocabulary Builder

Read one page of any book daily and write five new words with their antonyms.

6. Activity Time

Look, Observe and Write

Look at the picture carefully. Write five sentences about it using **naming words (nouns)**.



1. _____
2. _____
3. _____
4. _____
5. _____



Nouns are naming words. They are the names of people, places, animals or things.

7. ART INTEGRATED PROJECT

Based on the Theme *Punjab and Odisha*

🌸🌸 *Festivals Showcase* 🌸🌸

Illustrate and write about the famous festivals of *Punjab and Odisha*.

Instructions:

- Use neat handwriting and colourful charts/A4 sheets
- Decorate the borders creatively
- Add relevant drawings/ pictures
- Submit the project after the holidays

🌸 Do your work sincerely and creatively.

GRAMMAR WORKSHEET

1. Rearrange the jumbled words and phrases to form meaningful sentences.

- a) the heavy/ lifted/ suitcase/ The porter/ easily
- b) the / park / playing / in / are / children / The
- c) the/ birthday gift/ carefully/ Riya/ wrapped

2. Identify the type of given sentences.

- (a)What a beautiful rainbow it is!
- (b)Please close the door.
- (c)My father is a doctor.
- (d)Are you coming to the picnic tomorrow?

3. Underline the noun and write its kind (Common, Proper, Abstract, Collective).

- (a) The team played very well.

- (b) Honesty is the best policy.
- (c) Ravi and Anjali went to the market.
- (d) The city was decorated with lights.

4. Fill in the blanks with the correct type of noun mentioned in brackets.

- (a) _____ is necessary for success. (Abstract Noun)
- (b) My best friend's name is _____. (Proper Noun)
- (c) The _____ is grazing in the field. (Common Noun)
- (d) A _____ of geese flew over the lake. (Collective Noun)

5. Replace the underlined nouns with correct pronouns.

- (a) Rohan is my brother. Rohan loves to paint.
- (b) I saw Meena and Ritu at the mall. Meena and Ritu were shopping.

😊 HAPPY HOLIDAYS 😊

😊 HAPPY LEARNING 😊

Class 4

Maths Holidays Homework Assignment (2026-27)

1. Write the number names of the following numerals.

- a. 36,521
- b. 8,60,301

2. Write the numerals of the following number names.

- a. Ninety five thousand six hundred nine
- b. Two lakh seventy three thousand one hundred two

3. Write the place value and face value of the underlined digit.

- a. 1,25,364
- b. 7,00,004

4. Expand the following numbers.

- a. 8,97,653
- b. 9,08,087

5. Write the standard form of the following.

- a. $1,00,000 + 60,000 + 700 + 20 + 7$
- b. $50,000 + 7,000 + 900 + 50 + 9$

6. Arrange in Ascending order.

11,842 ; 42,131 ; 11,980 ; 18,769 ; 1,97,625

7. Arrange in Descending order.

5,64,213 ; 56,385 ; 1,56,142 ; 3,56,199 ; 56,263

8. Write the successor and predecessor of the following.

- a. 23,405. S- _____; P- _____
- b. 9,08,000 S- _____; P- _____
- c. 34,700 S- _____; P- _____
- d. 56,678 S- _____; P- _____

9. Form the smallest and the largest numbers using the digits given below (without repetition)

- a. 2,6,5,3,4,1
- b. 1,9,0,5,7,4

10. Round off the following to the nearest 10's , 100's , 1000's

- a. 13,478
- b. 6,23,567

11. Write the Roman numerals.

- a. 48 b. 32 c. 44

12. Write the following in Hindu-Arabic numerals.

- a. XIII b. LXVIII c. XXIX

13. Add the following using grouping property.

- a. $5,912 + 3,26,375 + 71,125$
b. $8,521 + 1,009 + 3,22,786$

14. Subtract

- a. $1,27,951 - 79,521$
b. $77,632 - 32,105$

15. Solve the following.

- a. $97,112 + 31,421 - 20,000$
b. $56,762 - 14,132 + 21,531$

16. Multiply the following.

- a. 124×561
b. 2652×25

17. Divide the number. Write down their Quotient and Remainder and also verify your answer.

- a. $2467 \div 6$
b. $8790 \div 15$

18. Estimate the following by first rounding off the numbers to the nearest 10's, 100's and 1000's:

- a. 365×173
b. $3,12,364 - 27,856$
c. $2,12,690 + 1,43,565$

19. Fill in the blanks using properties of (Addition, Subtraction) :

- a. $7,52,810 + \underline{\hspace{2cm}} = 7,52,811$
b. $(25,389 + 12,653) + 31,259 = 12,653 + (\underline{\hspace{2cm}} + 25,389)$
c. $12,107 - \underline{\hspace{2cm}} = 12,106$
d. $98,965 - 98,965 = \underline{\hspace{2cm}}$
e. $42,81,000 + 12,653 = 12,653 + \underline{\hspace{2cm}}$
f. $\underline{\hspace{2cm}} + 0 = 5,39,611$
g. $\underline{\hspace{2cm}} - 0 = 71,253$

20. Fill in the blanks using the concept of 10, 100 and 1000.

a. $79 \times 100 =$ _____

b. $726 \times$ _____ $= 726000$

c. $53 \times$ _____ $= 5300$

d. $329 \times 10 =$ _____

e. $721 \div 100$ -- Q: _____ ; R: _____

f. $1289 \div 1000$ -- Q: _____ ; R: _____

g. $1375 \div 10$ -- Q: _____ ; R: _____

21. A number is 1,47,554 less than the other number. If the other number is 4,50,000. find the number.

22. An institution has 56,500 students. If 29,565 are boys, then find the number of girls.

23. In a village there were 52,800 children, 1,54,000 men and the rest were women. If the total population of the village is 2,70,000 find the female population of the village.

24. Find the sum of the largest 6 digit and smallest 5 digit odd numbers.

25. Book has 236 pages. How many pages will be there in 125 such books?

26. Train covers 1493 kilometre in one trip. How much distance will it cover in 9 such trips?

27. In a garden, there are 2198 trees. If they are equally arranged in 14 rows, how many trees are arranged in each row?

28. A sweet shop owner make 624 sweets. If he packed them equally in 26 boxes, then how many sweets will be packed in each box?

Case Study.

29. Mr. John bought a piece of land for ₹2,75,400 and constructed the house for ₹8,65,900. He spent ₹12,35,700 for furniture. The total budget allocated by him is ₹ 25,00,000.

Read the above statement and answer the following questions.

a. What is the price of land bought by Mr. John?

b. Write the amount he spent for construction and furniture.

c. Write the total amount spent by Mr. John?

d. What is the difference between amount used in construction and the cost of land?

e. Estimate his savings to nearest 1000's.

30. You and Your father want to donate following items as a Diwali bonus to the staff of your father's factory. There are 25 workers.

- He bought 8 sewing machines for Rs. 5,760 each.
- He bought 10 smart phones for Rs. 3,000 each.
- He bought 7 steel utensil sets for Rs.2,257 each.

How much your father spend on Diwali gifting this year?

Numeration

Task 1 Write the Place Value

Number	Lakhs	Ten-Th.	Thousands	Hundreds	Tens	Ones
3,47,826						
92,145						
5,60,038						

Write the number name for: 4,73,209 → _____

Write the number name for: 8,06,541 → _____

Task 2 Ordering Numbers

500	1,000	1,500	2,000	2,500	3,000
-----	-------	-------	-------	-------	-------

Ascending Order (smallest → largest): _____, _____, _____, _____, _____, _____

Descending Order (largest → smallest): _____, _____, _____, _____, _____, _____

Which is the middle number? _____


Task 3 Comparing Numbers

Number A	Symbol (>, <, =)	Number B
82,091	—	82,910
6,00,050	—	6,00,500
7,34,218	—	7,43,218
99,999	—	1,00,000
3,50,000	—	3,05,000

Task 4 Expanded Form

Standard Form	Expanded Form
82,091	
6,00,050	
7,34,218	

Addition and subtraction Crossword



Across

- | | |
|--------------------|---------------------|
| 1. $1408 - 427$ | 23. $2 + 37$ |
| 4. $1627 + 6068$ | 24. $401 + 2294$ |
| 8. $601 + 3466$ | 26. $28 + 53$ |
| 9. $6046 - 2918$ | 28. $23833 - 11720$ |
| 10. $9 + 18$ | 30. $62 - 5$ |
| 11. $84863 - 2084$ | 31. $328 + 1133$ |
| 13. $24 + 21$ | 32. $10074 - 261$ |
| 14. $2109 + 7810$ | 35. $2826 + 3220$ |
| 15. $58 - 4$ | 36. $142 + 442$ |
| 17. $420 - 105$ | |
| 18. $40 + 946$ | |
| 19. $219 + 501$ | |
| 21. $499 - 15$ | |

Down

- | | |
|--------------------|---------------------|
| 1. $172 - 82$ | 18. $167 - 73$ |
| 2. $115 - 29$ | 19. $1 + 72$ |
| 3. $27929 - 10034$ | 20. $25695 + 3445$ |
| 4. $4734 + 2645$ | 21. $70644 - 21249$ |
| 5. $138 + 479$ | 22. $21 + 64$ |
| 6. $90348 + 2610$ | 24. $1300 + 816$ |
| 7. $105 - 47$ | 25. $110 - 49$ |
| 8. $779 - 304$ | 26. $1207 - 354$ |
| 10. $1 + 23$ | 27. $1 + 16$ |
| 12. $2 + 19$ | 29. $54 + 210$ |
| 14. $20 + 71$ | 31. $1 + 15$ |
| 16. $9 + 37$ | 33. $50 + 38$ |
| 17. $20 + 10$ | 34. $5 + 9$ |

Name: _____

Date: _____

COLOR BY NUMBER



MULTIPLICATION PRACTICE



Directions: Solve each multiplication problem. Then, use the color key to color the spaces with the matching answers.

COLOR KEY

 10,000 -
19,000
Red

 20,000 -
29,000
Orange

 30,000 -
39,000
Yellow

 40,000 -
49,000
Green

 50,000 -
59,000
Blue

 60,000 -
69,000
Purple

 70,000 -
79,000
Gray

 80,000 -
89,000
Black


$$\begin{array}{r} 324 \\ \times 57 \\ \hline \end{array}$$

$$\begin{array}{r} 278 \\ \times 88 \\ \hline \end{array}$$

$$\begin{array}{r} 186 \\ \times 222 \\ \hline \end{array}$$

$$\begin{array}{r} 237 \\ \times 346 \\ \hline \end{array}$$

$$\begin{array}{r} 432 \\ \times 48 \\ \hline \end{array}$$

$$\begin{array}{r} 256 \\ \times 96 \\ \hline \end{array}$$

$$\begin{array}{r} 704 \\ \times 81 \\ \hline \end{array}$$

$$\begin{array}{r} 285 \\ \times 288 \\ \hline \end{array}$$

$$\begin{array}{r} 608 \\ \times 72 \\ \hline \end{array}$$

$$\begin{array}{r} 315 \\ \times 178 \\ \hline \end{array}$$

$$\begin{array}{r} 650 \\ \times 96 \\ \hline \end{array}$$

$$\begin{array}{r} 925 \\ \times 72 \\ \hline \end{array}$$

$$\begin{array}{r} 408 \\ \times 156 \\ \hline \end{array}$$

$$\begin{array}{r} 513 \\ \times 123 \\ \hline \end{array}$$

$$\begin{array}{r} 832 \\ \times 22 \\ \hline \end{array}$$

$$\begin{array}{r} 461 \\ \times 154 \\ \hline \end{array}$$

$$\begin{array}{r} 342 \\ \times 135 \\ \hline \end{array}$$

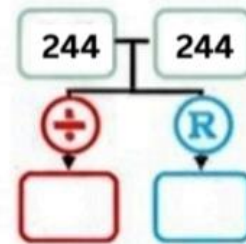
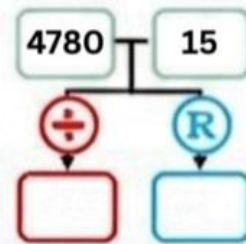
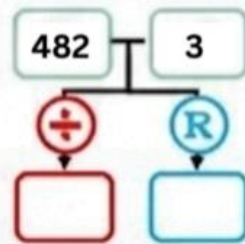
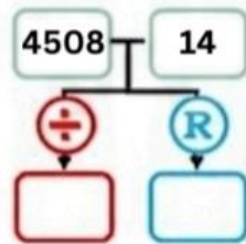
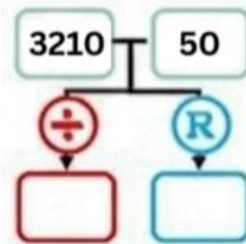
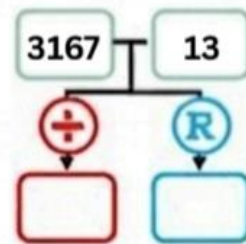
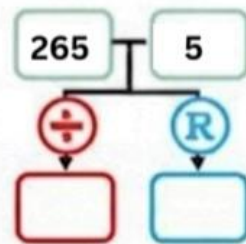
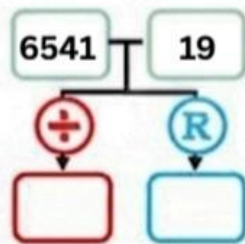
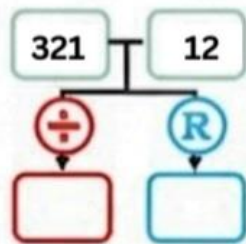
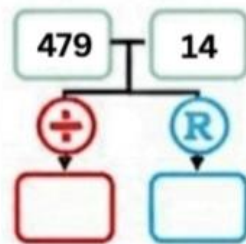
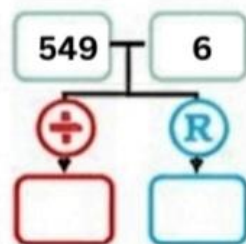
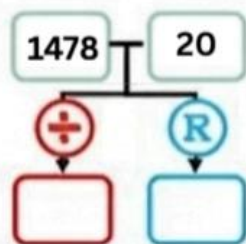
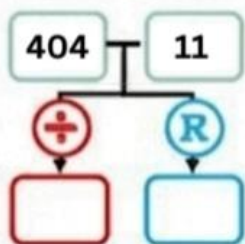
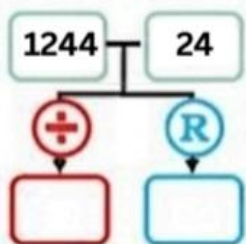
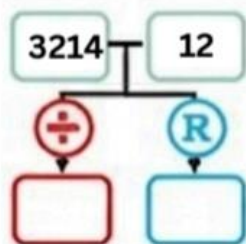
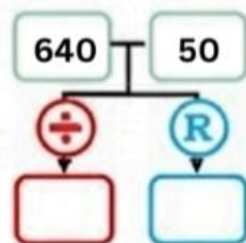
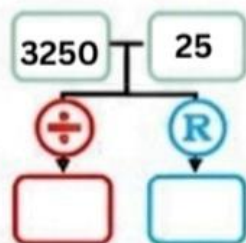
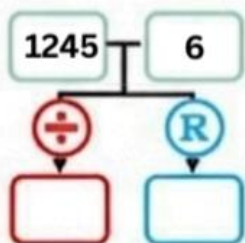
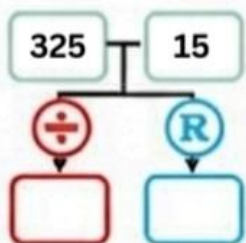
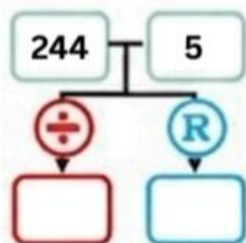
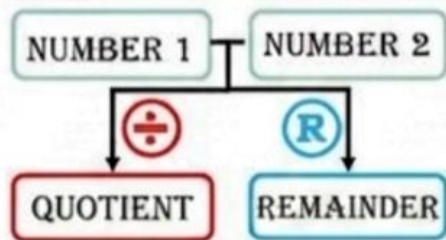
$$\begin{array}{r} 276 \\ \times 304 \\ \hline \end{array}$$

$$\begin{array}{r} 639 \\ \times 114 \\ \hline \end{array}$$

$$\begin{array}{r} 819 \\ \times 100 \\ \hline \end{array}$$

MATH PUZZLES

Find the missing quotients and remainders!



ਛੁੱਟੀਆਂ ਦਾ ਕੰਮ

ਵਿਸ਼ਾ - ਪੰਜਾਬੀ

ਜਮਾਤ - ਚੌਥੀ

ਯਾਦ ਕਰਨ ਦਾ ਕਾਰਜ

1. ਪਾਠ - 4,5,7 (ਅਭਿਆਸ ਕਾਰਜ ਪ੍ਰਸ਼ਨ /ਉੱਤਰ , ਸ਼ਬਦ -ਅਰਥ, ਵਾਕ, ਖਾਲੀ -ਥਾਂਵਾਂ)

2. ਵਚਨ ਬਦਲੋ (pg. no 44,45,46 ਅੱਖ-ਪਾਥੀ ਵਾਕ ਰੂਪ ਵਿੱਚ)

3. ਮੁਹਾਵਰੇ pg.no 71,72 (1-10)

4. ਬਹੁਤ ਹੀ ਸ਼ਬਦਾਂ ਦੀ ਥਾਂ ਇੱਕ ਸ਼ਬਦ pg.no 65,66(1-10)

***ਲਿਖਤੀ ਕਾਰਜ ***

1. ਪੰਜ ਸੁੰਦਰ ਲਿਖਾਈਆਂ ਅਲੱਗ ਕਾਪੀ ਤੇ ਲਿਖੋ।

2. A4 ਸਾਈਜ਼ ਸੀਟ 'ਤੇ ਕਿਸੇ ਵੀ ਵਿਸ਼ੇ 'ਤੇ ਸਵੈ ਲਿਖਤ ਰਚਨਾ (ਕਵਿਤਾ, ਕਹਾਣੀ, ਬੁਝਾਰਤਾਂ, ਲੋਕ ਬੋਲੀਆਂ, ਸਫ਼ਰਨਾਮਾ ਲਿਖੋ।)

ਕਲਾ ਸਮੱਲਿਤ ਗਤੀਵਿਧੀ ਕਾਰਜ

1. ਨਾਂਵ ਅਤੇ ਨਾਂਵ ਦੀਆਂ ਕਿਸਮਾਂ ਦਾ ਚਾਰਟ ਬਣਾਓ।

2. ਵਿਦਿਆਰਥੀ ਆਪਣੇ ਪਿਤਾ ਜੀ ਨਾਲ ਆਪਣੀ ਦੀ ਤਸਵੀਰ ਲਗਾ ਕੇ ਕਾਰਡ ਬਣਾਉਣਗੇ। (ਤੁਹਾਡੇ ਪਿਤਾ ਤੁਹਾਡੇ ਲਈ ਸਭ ਤੋਂ ਸ਼ਕਤੀਸ਼ਾਲੀ ਵਿਅਕਤੀ ਹਨ ਕਿਉਂ? ਤਿੰਨ ਚਾਰ ਸਤਰਾਂ ਵਿੱਚ ਵਰਨਣ ਕਰੋ।

3. A4 size sheet ਤੇ ਵਿਦਿਆਰਥੀ ਅੱਖਰਾਂ ਦੀ ਸਹੀ ਬਣਤਰ ਅਨੁਸਾਰ ਵਰਨਮਾਲਾ ਲਿਖਣਗੇ। (ਪੰਜਾਬੀ ਅੱਖਰਕਾਰੀ ਅਨੁਸਾਰ)

4. ਪ੍ਰੋਜੈਕਟ ਕਾਰਜ:- ਸਾਰੇ ਵਿਦਿਆਰਥੀ ਉੜੀਸਾ ਅਤੇ ਪੰਜਾਬ ਦਾ ਤੁਲਨਾਤਮਕ ਅਧਿਐਨ ਕਰਦੇ ਹੋਏ ਪੰਜਾਬ ਦੀਆਂ ਵਿਰਾਸਤੀ ਖੇਡਾਂ ਅਤੇ ਉੜੀਸਾ ਦੀਆਂ ਵਿਰਾਸਤੀ ਖੇਡਾਂ ਦੀਆਂ ਤਸਵੀਰਾਂ ਲਗਾ ਕੇ ਉਹਨਾਂ ਬਾਰੇ ਲਿਖਣਗੇ।(A4 size sheet)

*ਪੰਜਾਬ ਦੀਆਂ ਮੁੱਖ ਫ਼ਸਲਾਂ ਅਤੇ ਉੜੀਸਾ ਦੀਆਂ ਮੁੱਖ ਫ਼ਸਲਾਂ ਦੀਆਂ ਤਸਵੀਰਾਂ ਲਗਾ ਕੇ ਉਹਨਾਂ ਬਾਰੇ ਲਿਖੋ।

(A4 size sheet)

*ਹੇਠ ਲਿਖੀ ਬੇਤਰਤੀਬੀ ਕਹਾਣੀ ਨੂੰ ਸਹੀ ਤਰਤੀਬ ਵਿੱਚ ਆਪਣੀ ਪੱਕੀ ਕਾਪੀ ਤੇ (Grammar side)

1,2,3..... ਲਿਖੋ:-



*ਫਿਰ ਦੂਜੀ ਬੱਕਰੀ ਉੱਠੀ ਅਤੇ ਆਪਣੇ ਰਾਹ ਤੁਰ ਪਈ। ()

*ਦੋਹਾਂ ਬੱਕਰੀਆਂ ਨੇ ਇੱਕ ਦੂਜੀ ਦਾ ਦੂਰੋਂ ਧੰਨਵਾਦ ਕੀਤਾ ਅਤੇ ਅੱਗੇ ਨੂੰ ਤੁਰ ਪਈਆਂ। ()

*ਹੁਣ ਉਹ ਦੋਵੇਂ ਪਿੱਛੇ ਨਹੀਂ ਮੁੜ ਸਕਦੀਆਂ ਸਨ। ()

*ਦੋਵੇਂ ਆਪਣੀ ਸਮਝਦਾਰੀ ਕਾਰਨ ਬਿਨਾਂ ਪਿੱਛੇ ਮੁੜੇ ਪੁਲ ਪਾਰ ਕਰ ਗਈਆਂ। ()

*ਉਨ੍ਹਾਂ ਦੋਹਾਂ ਨੇ ਸਮਝਦਾਰੀ ਤੋਂ ਕੰਮ ਲਿਆ। ()

*ਇੱਕ ਪਿੰਡ ਵਿੱਚ ਡੂੰਘੀ ਨਦੀ ਵਗਦੀ ਸੀ। ()

*ਸਿੱਖਿਆ - ਮੁਸੀਬਤ ਵੇਲੇ ਸਮਝਦਾਰੀ ਤੋਂ ਕੰਮ ਲਵੋ। ()

*ਇੱਕ ਦਿਨ ਉਸ ਪੁਲ ਨੂੰ ਪਾਰ ਕਰਨ ਲਈ ਆਹਮੇ - ਸਾਹਮਣੇ ਤੋਂ ਦੋ ਬੱਕਰੀਆਂ ਆ ਕੇ ਖੜ੍ਹ ਗਈਆਂ। ()

*ਉਸ ਉੱਤੇ ਬੜੇ ਤੰਗ ਪੁਲ ਉੱਤੇ ਇੱਕੋ ਵੇਲੇ ਇੱਕੋ ਜੀਵ ਹੀ ਲੰਘ ਸਕਦਾ ਸੀ। ()

*ਦੋਹਾਂ ਨੇ ਪੁਲ ਨੂੰ ਪਾਰ ਕਰਨਾ ਸੀ। ()

◆ ਅਣਡਿੱਠਾ ਪੈਰਾ ਰਚਨਾ

ਵਿਦਿਆਰਥੀ ਹੇਠ ਲਿਖੇ ਪੈਰੇ ਵਿੱਚੋਂ ਪ੍ਰਸ਼ਨਾਂ ਦੇ ਉੱਤਰ ਲੱਭਣਗੇ ਅਤੇ ਆਪਣੀ ਪੱਕੀ ਕਾਪੀ ਤੇ (Grammar side) ਲਿਖਣਗੇ।

ਡਾਕੀਆ ਡਾਕ ਪਹੁੰਚਾਉਂਦਾ ਹੈ। ਉਹ ਡਾਕਖਾਨੇ ਵਿੱਚ ਬੈਠ ਕੇ ਡਾਕ ਛਾਂਟਦਾ ਹੈ। ਉਹ ਉਹਨਾਂ ਚਿੱਠੀਆਂ ਤੇ ਪਾਰਸਲਾਂ ਨੂੰ ਉਹਨਾਂ 'ਤੇ ਲਿਖੇ ਪਤਿਆਂ ਅਨੁਸਾਰ ਛਾਂਟਦਾ ਹੈ। ਫਿਰ ਉਹ ਘਰ-ਘਰ ਜਾ ਕੇ ਉਹਨਾਂ ਨੂੰ ਸਹੀ ਟਿਕਾਣਿਆਂ 'ਤੇ ਪਹੁੰਚਾਉਂਦਾ ਹੈ। ਚਿੱਠੀਆਂ ਤੇ ਪਾਰਸਲਾਂ ਨੂੰ ਹੀ ਡਾਕ ਕਿਹਾ ਜਾਂਦਾ ਹੈ। ਡਾਕ ਵਿੱਚ ਲੋਕਾਂ ਦੇ ਜ਼ਰੂਰੀ ਸੁਨੇਹੇ, ਸਰਕਾਰੀ ਚਿੱਠੀਆਂ ਤੇ ਹੋਰ ਸਮਾਨ ਸ਼ਾਮਲ ਹੁੰਦਾ ਹੈ। ਡਾਕ ਵੰਡਣ ਦਾ ਇਹ ਕੰਮ ਉਸ ਨੂੰ ਹਰ ਰੋਜ਼ ਕਰਨਾ ਪੈਂਦਾ ਹੈ। ਇਹ ਕੰਮ ਉਹ ਆਪਣੇ ਸਾਈਕਲ ਉੱਪਰ ਕਰਦਾ ਹੈ। ਉਸ ਦਾ ਕੰਮ ਬਹੁਤ ਸਖ਼ਤ ਹੈ। ਫਿਰ ਵੀ ਉਹ ਇਹ ਕੰਮ ਬਹੁਤ ਖੁਸ਼ੀ-ਖੁਸ਼ੀ ਕਰਦਾ ਹੈ।

1. ਡਾਕੀਆ ਕੀ ਕੰਮ ਕਰਦਾ ਹੈ?

2. ਡਾਕ ਕਿਸ ਨੂੰ ਕਿਹਾ ਜਾਂਦਾ ਹੈ?

3. ਡਾਕ ਵਿੱਚ ਕੀ ਕੁਝ ਸ਼ਾਮਲ ਹੁੰਦਾ ਹੈ?

4. ਡਾਕੀਆ ਡਾਕ ਵੰਡਣ ਦਾ ਕੰਮ ਕਿਵੇਂ ਕਰਦਾ ਹੈ?

5. ਵਿਰੋਧੀ ਸ਼ਬਦ ਓ. ਸਹੀ , ਅ. ਖੁਸ਼ੀ

6. ਸਹੀ /ਗਲਤ


ੳ. ਡਾਕੀਆ ਘਰ ਬੈਠ ਕੇ ਡਾਕ ਛਾਂਟਦਾ ਹੈ। ()

ਅ. ਡਾਕੀਆ ਡਾਕ ਵੰਡਣ ਦਾ ਕੰਮ ਕਦੇ- ਕਦੇ ਕਰਦਾ ਹੈ। ()

ੲ. ਡਾਕੀਆ ਆਪਣਾ ਕੰਮ ਖੁਸ਼ੀ ਖੁਸ਼ੀ ਕਰਦਾ ਹੈ। ()

* ਹੇਠ ਦਿੱਤੀ ਤਸਵੀਰ ਨੂੰ ਦੇਖ ਕੇ (5-7) ਸਤਰਾਂ ਵਿੱਚ ਤਸਵੀਰ ਵਰਣਨ ਕਰੋ।

*NOTE - ਰੰਗੀਨ ਤਸਵੀਰ ਕਢਵਾ ਕੇ ਆਪਣੀ ਪੱਕੀ ਕਾਪੀ ਤੇ (Grammar side) ਚਿਪਕਾਉ ।



ਨੋਟ:- ਛੁੱਟੀਆਂ ਦਾ ਕੰਮ ਸਾਫ਼ ਅਤੇ ਸੁੰਦਰ ਲਿਖਾਈ ਵਿੱਚ ਕਰੋ।

ननकाना साहिब पब्लिक स्कूल, गिल पार्क, लुधियाना

ग्रीष्मावकाश गृहकार्य

कक्षा - चौथी

विषय -हिंदी

1. पाठ 1 से लेकर 4 तक के शब्दार्थ, अभ्यास कार्य, प्रश्न उत्तर, वाक्य प्रयोग और अब तक करवाया गया संपूर्ण व्याकरण कार्य याद करें।
2. अवकाश प्राप्ति के लिए प्रार्थना - पत्र और अनुच्छेद- मदर्स डे का दो-दो बार लिखित अभ्यास करें।
3. कल एकीकृत परियोजना (Art Integrated Project)
(Roll no.1-22)पंजाब और ओडिशा की मुख्य फसलों पर आधारित एक परियोजना तैयार करें
(Roll no.23-42) पंजाब और ओडिशा के मुख्य खेल और खिलाड़ी पर एक परियोजना तैयार करें।
4. बाल साहित्य पर आधारित कोई भी एक पुस्तक पढ़कर उसके बारे में अपने विचार लिखें।
5. पितृ दिवस पर एक सुंदर-सा पोस्टर बनाएं और अपने पिता के लिए एक छोटी- सी कविता लिखें।
6. अपने दादा दादी/ नाना नानी से उनके बचपन की कहानी सुनकर जिस कहानी या घटना ने आपको ज्यादा प्रभावित किया ,उसे अपने शब्दों में लिखें।

7.अपठित गद्यांश के आधार पर निम्न प्रश्नों के उत्तर दीजिये :-

गोपाल कृष्ण गोखले बचपन से ही सत्यवादी थे | एक बार उनके शिक्षक ने एक प्रश्न हल करने को दिया | दूसरे दिन जब गृहकार्य देखा गया तो सभी के उत्तर गलत थे | केवल गोपाल ने ही प्रश्न का उत्तर सही लिखा था | शिक्षक ने गोपाल की सबके सामने प्रशंसा की | गोपाल ने उन्हें रोकते हुए रुंधे हुए गले से कहा, "गुरु जी, मैं इस प्रशंसा का अधिकारी नहीं हूँ | प्रश्न तो मेरी बड़ी बहन ने हल किया है, इसलिए शाबाशी मुझे नहीं मिलनी चाहिए | " शिक्षक प्रसन्न होकर बोले, "इसमें रौने की बात नहीं है | तुमने सच बोला है इसलिए यह पुस्तक मैं तुम्हें पुरस्कार में देता हूँ | यह तुम्हें सदा सत्य बोलने को प्रेरित करती रहेगी |

(क) गोपाल कृष्ण गोखले में क्या गुण थे ?

(ख) गोपाल का गृहकार्य देखकर शिक्षक ने क्या किया ?

(ग) शिक्षक से अपनी प्रशंसा सुन गोपाल ने क्या किया ?

(घ) शिक्षक ने गोपाल को पुरस्कार में क्या दिया और क्यों ?

(ङ) वचन बदलिए: बहन, पुस्तक

8.

चित्रों को देखिए और उसके पर्यायवाची शब्द लिखिए।

<p>पानी</p>  <p>जल</p>	<p>हवा</p> 	<p>आकाश</p> 	<p>जंगल</p> 
<p>घर</p> 	<p>अग्नि</p> 	<p>असुर</p> 	<p>अश्व</p> 
<p>आँख</p> 	<p>इच्छा</p> 	<p>गरमी</p> 	<p>ईश्वर</p> 
<p>चंद्र</p> 	<p>नदी</p> 	<p>पवन</p> 	<p>पुत्र</p> 

9.

वर्णमाला

चित्र को देखकर निम्न वर्ग पहेली में उनके नाम ढूँढो

							
							
	सि	पा	ही	ज	प	पी	ता
	क	ग	रा	नी	ब	ला	उ
	सी	ढ़ी	ज	ढ	ध	ड	जी
	टी	ठ	म	ग	र	म	भ
	छ	द	क	भ	ली	र	म
	ल	क	ड़ी	ज	प	न	घ
	क्ष	ली	फ	रे	ल	गा	ड़ी
							
							
							
							
							
							

10. दिए गए चित्र का 25-30 शब्दों में वर्णन कीजिए:



1.

2. नीचे दिए गए चित्र में एक बच्चे का जन्मदिन मनाया जा रहा है अपनी कल्पना शक्ति के आधार पर इस पर एक छोटी सी कहानी बना कर लिखिए।



Nankana Sahib Public School, Gill Park Ludhiana

Grade 4(Computer Worksheet)

Name..... class & Section Rollno.....

A. Tick the correct option:

1.It is the unit to measure the speed of CPU.

- a) MHz b)GHz C) Both a and b

2.which component of computer is also known as the brain of the computer?

- a) Motherboard b) CPU c) Memory

3.Which type of memory is volatile and loses its content when the power is switched off?

- a) RAM b) ROM C) Hard Disk Drive

4._____ unit controls all the functions of a computer.

- a) ALU b) Control c) Memory

5.A_____ is a large circuit board inside the system unit.

- a) CPU b) motherboard c) RAM

6._____ feature automatically creates symbols, fractions and ordinal numbers.

- a) Mail Merge b) Autocorrect c) AutoFormat

7._____ is a process of combining or merging the main document with the data source.

- a) Mail Merge b) Tracking changes c) AutoFormat

8._____ are a way of organizing information into rows and columns.

- a) Tables b) Autocorrect c) Tracking changes

9._____ will make the text appear above the regular line of text.

- a) Subscript b) Superscript c) Both a and b

B. Write 'T' for True and 'F' for False for statements:

1. Writer is a popular word processing program.____

2. Table in Writer allow users to organize information into rows and columns.____

3. Autocorrect does not correct errors in capitalization.____

4. We can combine two or more cells in your table to create one large cell.____

5. Mail Merge is done by merging data document with the data source.____

- 6. Motherboard is a small circuit-board inside the system unit.____
- 7. ROM is a volatile memory.____
- 8. SSD stands for Solid state Drive.____
- 9. SMPS is the circuit-board that is fitted in a socket on the motherboard.____
- 10. Ports in a laptop are located on the back of the system unit. ____

C. Fill in the Blanks:

- 1. A _____ is also called computer case.
- 2. By default, word aligns your table text to the _____ inside each cell.
- 3. _____ is a non- volatile memory type that stores data permanently.
- 4. _____ feature automatically creates symbols, fractions and ordinal numbers.
- 5. _____ are a way of organizing information into rows and columns.
- 6. _____ is a process of combining or merging the main document with the data source.
- 7. The speed of CPU is measured in _____ and _____.
- 8. _____ is a power supply unit in a computer that is used to transfer power to it.

D. Answer the following questions:

Q1. What do you mean by system unit?

Ans: _____

Q2. Write any two uses of motherboard in a computer?

Ans: _____

Q3. Write the names of components of system unit?

Ans: _____

Q4. What are the uses of ports?

Ans: _____

Q5. What is the purpose of Superscript and Subscript?

Ans: _____

Q6. What are the benefits of Mail Merge?

Ans: _____

Q7. What do you mean by Mail Merge?

Ans: _____

Nankana Sahib Public School, Gill Park Ludhiana

Holidays' Homework (2026-27)

Grade-IV

Subject - Social Science

1. Learn the following chapters for Weekly Test

Chapter-3 My Country and its Landscape

Chapter-4 The Northern Mountains and Northern Plains

2. Make a Model according to your Roll.No.

***(Thermocol is not allowed for Model Making)**

Roll.No.	Topic
2	Rainwater Harvesting
4	Musical Instruments
6	Types of Forests
8	A River and delta
10	National Park
12	Water Cycle
14	Indian Historic Buildings (any one)
16	Windmill
18	Means of Transport
20	Means of Communication
22	Neighbourhood Places
24	Soil Profile
26	Water Resources
28	Heritage of India
30	National Symbols
32	Terrace Farming
34.	ATM
36	An Oasis
38 onward	Seasons

3. Make a Chart according to given Roll Numbers on A3 sheet.

Roll No.	Topic
1-10	Metallic Minerals
11-20	Non-Metallic Minerals
21-30	Scene of Desert
31 onwards	Types of Industries

4. Project Work

- ❖ Collect pictures of some famous, monuments and forts and palaces built in the different cities of Rajasthan and paste them in your scrapbook. write a short note on each of them.
- ❖ Collect the weather reports for your city from a newspaper for a week. Record the information from the weather reports collected by you in the Scrap book.

**Grade - 4 Assignment Ch-3 and 4
Subject- Social Science**

A) Multiple choice questions:-

1. In which region is India located on world map?
a) Australia. b) Europe c) South Asia
2. In how many physical divisions is India divided into?
a) 5. b) 6 c) 8
3. The Himalayas extends _____ km from east to west in India.
A) 3500 b) 2400 c) 1900
4. Which one of these is not a union territory?
a) Lakshadweep b) Himachal Pradesh c) Jammu and Kashmir
5. What does the brown coloured portion on map denote ?
a) mountains. b) plains. c) plateau
6. Where do the president and prime minister of India live ?
a) Chandigarh. b) New Delhi. c) Mumbai

B) Fill in the blanks:-

1. is the slow moving river of ice.
2. The outer Himalayas are known as
3. River Ganga meets river Yamuna at
4. The is the highest mountain range in the world.
5. The Hills are said to be the 'Storehouse of timber.
6. The Himalayan mountains separate India and by a natural boundary.

C) True/False

1. Being a part of South Asia India is surrounded by water on three sides.
2. The Brahmaputra Basin originates from Gangotri Glacier.

3. Chandigarh is the capital of Punjab and Haryana.
4. The word Himalaya in Tamil means 'abode of ice'.
5. The Satluj basin covers the States of Maharashtra and Goa.
5. Terrace farming is practiced on slopes.

D) Match it

A.	B
1 Sunderbans	Shipki La
2. Ladakh	The Royal Bengal Tiger
3 Satluj	Leh
4 The Greater Himalayas	kashmir
5 States	Himadri
6 Carpet weaving	28

E.Name the Following

1. Name the Pink City of India. _____
2. Name the main tributary of Satluj river. _____
3. Sunderban forest is the natural habitat of which animal ? _____
4. What is the large low- lying area watered by river and its tributaries called?

5. What is the altitude of Kanchanjunga? _____
6. In how many parallel ranges the Himalayas are divided into? _____
7. Name the glacier which is guarded by both Indian and Pakistani armies.. _____
- 8.Which is the capital of Ladakh ? _____