

**NANKANA SAHIB PUBLIC SCHOOL, GILL PARK,  
LUDHIANA**

**GRADE-3**

**📅 Holidays Homework**

**Subject -English**

**📝 Academic Tasks**

📌 Do Passage Comprehensions (pg-111 to 116) on book Grammar Mission Book.

📌 Make a beautiful chart on Pronouns using A4 size sheet and paste it on grammar side note book.

📌 Do 1 page of cursive handwriting daily.(on separate notebook)

**🌟 Fun Activities 🌟**

🌟 Make a Greeting Card on *Father's Day* expressing your love and affection. (post the pics in class group on *21st June*)



★ Read any English newspaper daily and paste the cutting of News Headlines atleast 20. (on scrap notebook)

### Learning Work

Revise the syllabus of Pt-3

◆ All grammar topics till date.

### Art Integrated Activity

★ Do ART INTEGRATED PROJECT work on A4 size sheet (maximum 2 sheets) based on the theme Punjab and Odisha



◆ Dress and Lifestyle Comparison

Present the traditional attire and daily lifestyle of Punjab and Odisha through drawings/pictures and short descriptions

## 1. Grammar Worksheet

*1. Underline the proper noun and circle the common noun.*

1. Reena has two brothers - Rahim and Sam.

2. My aunt lives in Delhi.

*II. Name the type of noun that the underlined word in each sentence represents.*

1. There are beautiful flowers in the garden.

2. Mrs. Shah is our English teacher.

*III. Fill in the blanks with the collective noun.*

1. My school has a huge \_\_\_\_\_ of books.(library/bouquet)

2. We saw a \_\_\_\_\_ of sheep in the field .  
(pride/flock)

*IV. Fill up the blanks with the most suitable noun.*

1. She bought three \_\_\_\_\_(egg/eggs) from

the market.

2. I got a \_\_\_\_\_ (star/stars) for my good handwriting.

*V. Fill up the blanks with the plurals of the words given in the brackets.*

1. I like eating \_\_\_\_\_ (mango) and \_\_\_\_\_ (orange)

2. She broke two \_\_\_\_\_ (tooth) when she fell down.

**VI. Rewrite the following sentences after writing the appropriate feminine gender of the underlined words.**

1. I love my brother.

---

## 2. The emperor killed the tiger.

---

II. Observe the picture carefully and answer the questions.



Q1. How many swings are in the picture?

---

Q2. How many children are playing in the park?

---

Q3. What is the time on the clock?

---

Q4. Are the children enjoying in the picture?

---

Q5. Where can you sit in the park?

---

III. Read the passage and also observe the given picture to answer the questions.



I have a new puppy. His name is Max. Max is a small and has brown fur. He likes to play with his red ball. We play in the park. I love Max.

Q1. What is the name of the puppy?

---

Q2. What is the colour of Max?

---

Q3. What does Max like to play with?

---

Q4. Where do they play?

---

Happy Holidays ☺

**(A) Fill in the blanks :**

1. Smallest 3 digit number is \_\_\_\_\_.
2. Write the missing number 1574\_\_\_\_,1576
3. What comes just after 4689 \_\_\_\_\_?
4. The standard form of  $5000+20+9$  is \_\_\_\_\_.
5. Odd numbers end up with \_\_\_\_\_.
6. The result of addition is called \_\_\_\_\_.
7. The numbers to be added are called \_\_\_\_\_.
8. The result of subtraction is called \_\_\_\_\_.
9. The number to be subtracted is called \_\_\_\_\_.
10. Multiplication is also called repeated\_\_\_\_\_.
11. The answer of the multiplication is called\_\_\_\_\_.
12.  $4567+ \text{_____} = 4568$
13.  $5642 - 5642 = \text{_____}$
14.  $8721 + 0 = \text{_____}$
15.  $2370 - \text{_____} = 2370$

**(B) Answer the following questions**

1. Write the following numbers in words:  
(i) 7283 -           (ii) 1098-
2. Write in numerals.  
(i) Two thousand twenty -  
(ii) Nine thousand nine hundred fifty nine
3. Count forward and write the next four numbers.  
(i) 4876, \_\_\_\_\_, \_\_\_\_\_, \_\_\_\_\_, \_\_\_\_\_  
(ii) 7523, \_\_\_\_\_, \_\_\_\_\_, \_\_\_\_\_, \_\_\_\_\_
4. Count backward And write the next five numbers .  
(i) 2326, \_\_\_\_\_, \_\_\_\_\_, \_\_\_\_\_, \_\_\_\_\_, \_\_\_\_\_  
(ii) 6238 , \_\_\_\_\_, \_\_\_\_\_, \_\_\_\_\_, \_\_\_\_\_, \_\_\_\_\_
5. Write the place value and face value of the underline digit:  
(a)  $36\underline{7}8$  -           (b)  $49\underline{0}5$ -
6. Draw and represent 4-digit number 9153 on abacus.
7. Write the following numbers in expanded form: (a) 3146.           (b) 5789
8. Write the standard numerals for the following: (a)  $2000+ 60+7$            (b)  $4000+100+40+7$
9. Write the successor of the following numbers: (a) 8790.           (b) 5648
10. Write the predecessor of the following numbers: (a) 5609           (b) 4566
11. Write the following numbers in ascending order and descending order:  
a ) . 6428,4139,8172,4193  
b ) ) 7436,7634,6734,6473
12. Take the even number and circle the odd number:  
6075,9020,6710,1877,3579
13. Find the sum.

(a)  $2387 + 4156$ .      (b)  $5689 + 1347$

(c)  $4566 + 1345 + 1002$  (d)  $5678 + 1309 + 4581$

(e) 6 thousands 4 hundreds 2 tens 6 ones and 7 thousands 3 hundreds 5 tens 2 ones

14. Estimate the sum to the nearest 10's and 100's by first rounding of the numbers:

(a)  $2567 + 3459$ .      (b)  $1422 + 1006$

15. Subtract :

(a)  $3678 - 3259$ .      (b)  $1472 - 349$

16. Solve the following:

(a)  $4169 + 350 - 2173$

(b)  $7689 + 345 - 5678$

17. Estimate the difference by first round off the numbers to the nearest 10's :

(a)  $2435 - 1235$ .      (b)  $6212 - 3256$

18. Write the product :

(i)  $5 \times 8 = \underline{\hspace{2cm}}$ .

(ii)  $10 \times 3 = \underline{\hspace{2cm}}$

(iii)  $9 \times 4 = \underline{\hspace{2cm}}$ .      (iv)  $6 \times 7 = \underline{\hspace{2cm}}$

19. Multiply the following.

a.  $23 \times 42$ .      b.  $446 \times 18$

c.  $26 \times 15$ .      d.  $234 \times 23$

20. Solve the following:

- a. In a sports club 2015 children like to play cricket and 1437 children like to play tennis. How many children like to play cricket and tennis ?
- b. There were 2700 ducks in a farm. By June 520 ducks died. By December 645 more ducks were born. How many ducks were there in the farm in December ?
- c. 4600 people went to the fair. 1986 people left early. How many people were still at the fair?
- d. What must be added to 4662 to get 7966 ?
- e. Form smallest and the largest four digit number using the digits 6, 1, 5 and 3 also. find the difference between them.

21. Fill in the blanks :

a.  $40 \times \underline{\hspace{2cm}} = 1600$       b.  $13 \times 200 = \underline{\hspace{2cm}}$

c.  $678 \times 1 = \underline{\hspace{2cm}}$ .      d.  $65 \times 34 = \underline{\hspace{1cm}} \times 65$

e.  $39 \times 0 = \underline{\hspace{2cm}}$ .      f.  $56 \times \underline{\hspace{2cm}} = 56$

g.  $23 \times 100 = \underline{\hspace{2cm}}$       h.  $79 \times 1000 = \underline{\hspace{2cm}}$

22. Learn and write tables from 2 to 15.

Name: \_\_\_\_\_ Date: \_\_\_\_\_

Circle the correct number.

3 tens 4 ones	<u>34</u> 56 43	5 hundreds 6 tens 1 ones	561 651 165
2 hundreds 5 tens 9 ones	295 259 290	0 hundreds 9 tens 6 ones	960 96 69
4 hundreds 0 tens 4 ones	440 444 404	1 hundred 5 tens 3 ones	135 153 53
9 hundreds 8 tens 3 ones	938 893 983	8 hundreds 8 tens 0 ones	800 808 880
5 hundreds 6 tens 1 ones	561 615 516	7 hundreds 9 tens 5 ones	597 795 759

23. Solve sums on Pg 1 and solve puzzle of Pg 2

$$\begin{array}{r} 533 \\ - 69 \\ \hline \end{array}$$

$$\begin{array}{r} 765 \\ - 324 \\ \hline \end{array}$$

$$\begin{array}{r} 870 \\ - 513 \\ \hline \end{array}$$

$$\begin{array}{r} 526 \\ - 178 \\ \hline \end{array}$$

$$\begin{array}{r} 778 \\ - 94 \\ \hline \end{array}$$

$$\begin{array}{r} 738 \\ - 70 \\ \hline \end{array}$$

$$\begin{array}{r} 584 \\ - 222 \\ \hline \end{array}$$

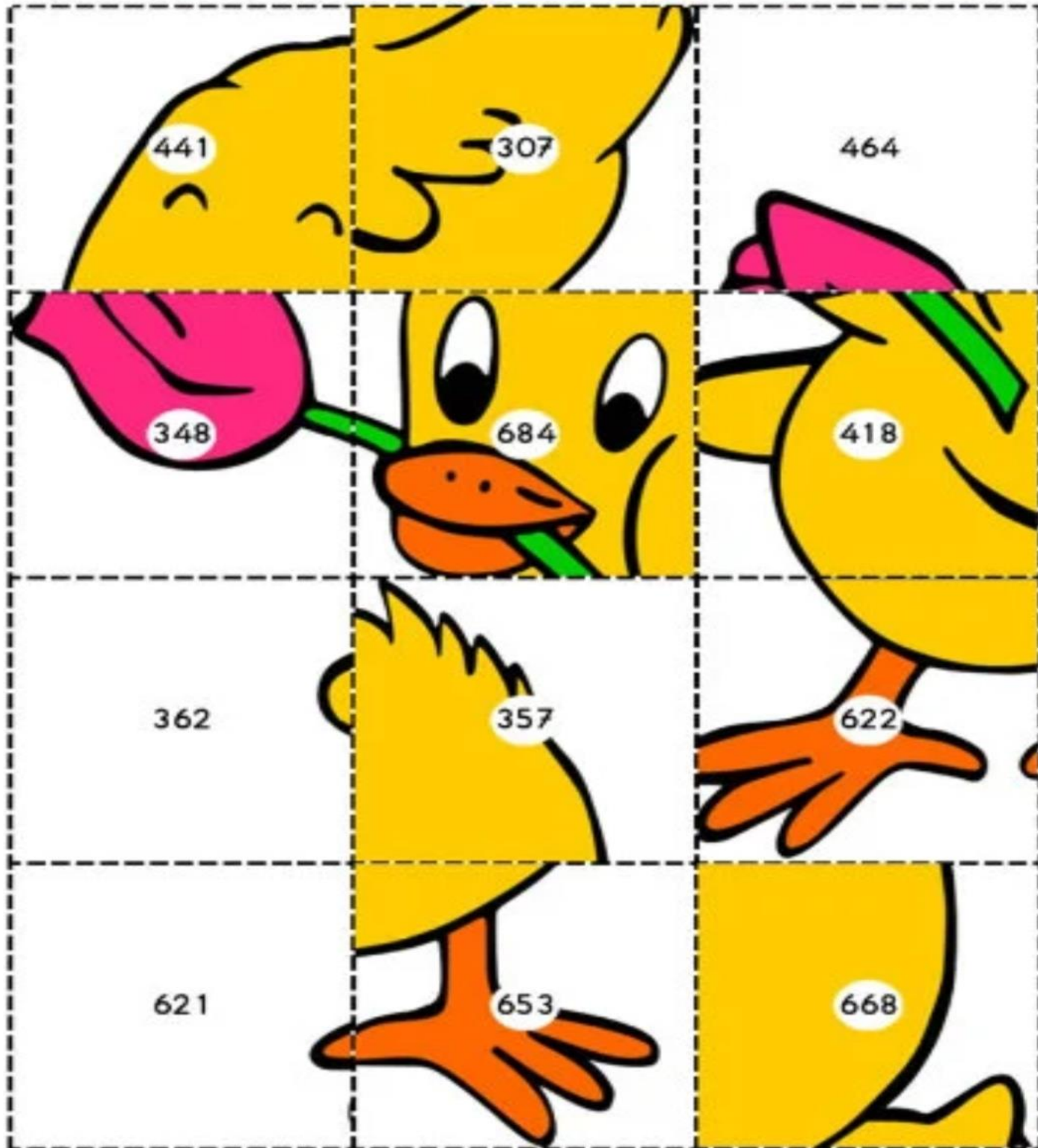
$$\begin{array}{r} 944 \\ - 526 \\ \hline \end{array}$$

$$\begin{array}{r} 537 \\ - 230 \\ \hline \end{array}$$

$$\begin{array}{r} 728 \\ - 107 \\ \hline \end{array}$$

$$\begin{array}{r} 929 \\ - 307 \\ \hline \end{array}$$

$$\begin{array}{r} 911 \\ - 258 \\ \hline \end{array}$$





19 x 1

2 x 10

4 x 5

7 x 2

19 x 1

5 x 4

2 x 7

1 x 17

2 x 9

17 x 1

6 x 3

3 x 6

4 x 5

2 x 7

18 x 1

9 x 2

10 x 2

4 x 5

4 x 5

10 x 2

18 x 1

13 x 1

9 x 3

9 x 2

19 x 1

5 x 4

19 x 1

4 x 5

1 x 13

1 x 18

7 x 2

3 x 6

3 x 5

1 x 15

2 x 7

2 x 7

1 x 19

20 x 1

1 x 19

4 x 4

16 x 1

9 x 2

6 x 3

1 x 16

2 x 8

4 x 4

8 x 2

NANKANA SAHIB PUBLIC SCHOOL, GILL PARK

LUDHIANA

SUMMER VACATION HOLIDAYS HOME WORK

SUBJECT SOCIAL SCIENCE

**A.Learning Work**

L-3 The Earth and it's Neighbours

L-4 Air Around Us

Learn both chapters for Weekly Test.[22July,2026]

**B.Make a Model According to given Topic ( Roll Number Wise)**

**( Thermocol is not allowed)**

**Roll no**

**Topic**

- |       |  |
|-------|--|
| 2.    | * Rotation Causes Day and Night                |
| 4     | *Revolution Causes Seasons                     |
| 6     | * Globe  |
| 8     | *Solar System                                  |
| 10    | * Rainwater Harvesting                         |
| 12    | * 3 R's ( create three mini dustbins)          |
| 14    | * 3D Political map of India                    |
| 16    | * Historical Monuments.                        |
| 18    | *WaterPollution                                |
| 20.   | * The Himalayan Range                          |
| 22    | *Noise Pollution                               |
| 24    | * Desert Scene(cactus plants,Camel, dunes etc) |
| 26    | * Unity in Diversity.                          |
| 28    | *Air Pollution                                 |
| 30    | * Islands                                      |
| 32,38 | * Northern Plains                              |
| 34,40 | * Healthy Environment                          |
| 36,42 | * Landforms                                    |

**C.Make a Chart According to the given topic. ( any one)**

- \* Water Cycle (A4size sheet) Roll no. 1to 14.





- a. gas                      b. liquid                      c. snow
6. The water on the earth is present in \_\_\_\_\_ natural forms.  
a. three                      b. two                      c. five
7. When water is frozen, it is in the \_\_\_\_\_ state.  
a. solid                      b. liquid                      c. gas
8. The \_\_\_\_\_ of the earth's surface is covered with water  
a.  $\frac{3}{4}$                       b.  $\frac{1}{4}$                       c.  $\frac{1}{2}$

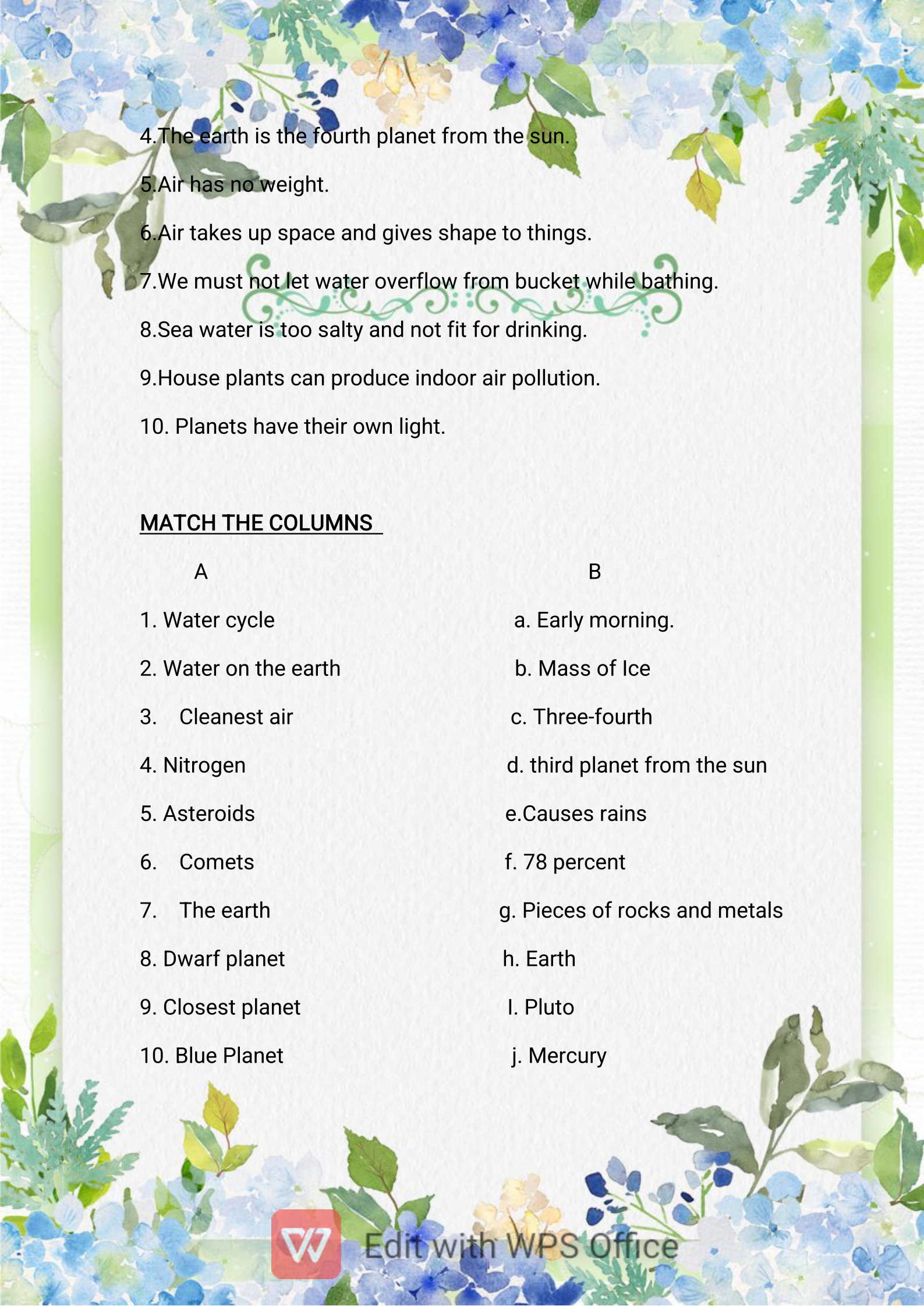
### **B. FILL IN THE BLANKS**

1. \_\_\_\_\_ is the most important source of water.
2. The process of collecting and storing \_\_\_\_\_ water is called rainwater harvesting.
3. Rain water fills the areas on the ground such as rivers and \_\_\_\_\_.
4. Air has \_\_\_\_\_.
5. \_\_\_\_\_ forms about 78 percent of the Earth earth's atmosphere.
6. Planets have no \_\_\_\_\_ of their own.
7. Besides the sun and the planets, the solar system consists of moons, \_\_\_\_\_ and comets.
8. The earth moves around the sun it it's fixed \_\_\_\_\_.

### **TRUE/FALSE**

1. The moon is the earth's nearest neighbour.
2. Jupiter is the hottest planet.
3. Moon is the earth's natural satellite.



- 
4. The earth is the fourth planet from the sun.
  5. Air has no weight.
  6. Air takes up space and gives shape to things.
  7. We must not let water overflow from bucket while bathing.
  8. Sea water is too salty and not fit for drinking.
  9. House plants can produce indoor air pollution.
  10. Planets have their own light.

### MATCH THE COLUMNS

A

1. Water cycle
2. Water on the earth
3. Cleanest air
4. Nitrogen
5. Asteroids
6. Comets
7. The earth
8. Dwarf planet
9. Closest planet
10. Blue Planet

B

- a. Early morning.
- b. Mass of Ice
- c. Three-fourth
- d. third planet from the sun
- e. Causes rains
- f. 78 percent
- g. Pieces of rocks and metals
- h. Earth
- i. Pluto
- j. Mercury





**NAME THE FOLLOWING**

1. Which planet is called the red planet?

\_\_\_\_\_

2. Which planet supports life?

\_\_\_\_\_

3. The earth is surrounded by a layer of air is called\_\_\_\_\_.

4. It is the gaseous form of water.

\_\_\_\_\_

5. It fills the areas on the ground such as rivers and canals.

\_\_\_\_\_

6. It is a mixture of gases like nitrogen, oxygen and carbon dioxide.

\_\_\_\_\_.





7. Which ninth planet was removed from the group of planets?

\_\_\_\_\_

8. What keeps the air clean?

\_\_\_\_\_

9. Name the main source of fresh water on the earth.

\_\_\_\_\_

10. What do people use to take out under ground water?

\_\_\_\_\_

**ANSWER THE FOLLOWING QUESTIONS .**

Q1 Explain the sources of water?

Ans. \_\_\_\_\_

\_\_\_\_\_



Q2 Why is the earth called 'blue planet'?

Ans. \_\_\_\_\_

\_\_\_\_\_

Q-3 What is air made of?

Ans. \_\_\_\_\_

\_\_\_\_\_

Q-4 Write the different properties of air.

Ans \_\_\_\_\_

\_\_\_\_\_

Q-5 What does the solar system consists of?

Ans \_\_\_\_\_

\_\_\_\_\_

Q-6 What are asteroids and comets?

Ans \_\_\_\_\_

\_\_\_\_\_





Edit with WPS Office

ननकाना साहिब पब्लिक स्कूल, गिल पार्क ,लुधियाना ।

ग्रीष्मावकाश गृहकार्य कक्षा तीसरी सत्र 2026-27

कला का समावेश विभिन्न विषयों में कलात्मक अभिव्यक्ति को पिरोकर शैक्षिक अनुभव को समृद्ध बनाता है। हमारी परियोजना का विशेष उद्देश्य पंजाब और ओडिशा की अनूठी और विविध कला शैलियों को शामिल करना है, जिससे सहयोगात्मक शिक्षण के माध्यम से सांस्कृतिक विरासत की गहरी समझ विकसित हो सके।

1 \*Art integrated project\* (Punjab state comparison with Odisha)

अ) Roll no (1-20) पंजाब और ओडिशा के खानपान (मुख्य व्यंजन) को दर्शाती एक परियोजना तैयार करें।

ब) Roll no (21-40) वेशभूषा और नृत्य कला को दर्शाती हुई परियोजना तैयार करें।

2. पाठ 1 से 4 तक के प्रश्नोत्तर, अभ्यास कार्य, वाक्य प्रयोग और व्याकरण- भाग की दोहराई करें।

3. शब्द पहेली( दी गई वर्ग पहेली में से कम से कम 10 राज्यों के नाम ढूंढ कर लिखें)

दिशा निर्देश → ↓ ↘ ↙

मे	प	आ	हि	छ	गु	ओ	डि	शा	अ	स	म
घा	म	न्ध्र	मा	त्ती	ज	क	र्ना	ट	क	प	अ
ल	ध्य	प्र	च	स	र	रा	ते	ल	गा	ना	रू
य	प्र	दे	ल	ग	त	उ	ज	ह	रि	या	णा
त	दे	श	प्र	ढ़	बि	त्त	त्त	स्था	झा	पं	च
मि	श	म	दे	म	हा	रा	ष्ट्र	र	न	जा	ल
ल	त्रि	णि	श	श	र	ख	ख	के	प्र	ब	प्र
ना	र	पु	ना	गा	लै	ण्ड	गो	वा	र	दे	दे
डु	ल	र	रा	प	श्चि	म	बं	गा	ल	ल	श

4. निम्नलिखित दिए गए प्रश्नों के उत्तर दें -

1 चींटी और हाथी में झगड़ा क्यों नहीं हुआ?

-----

2 चींटी और हाथी की मित्रता देखकर कौन पछताए?

---

3 चींटी और हाथी ने एक दूसरे से किस तरह बातें की?

---

4 किसान के चारों बेटे कैसे थे?

---

5 एकता में क्या शक्ति होती है?

---

### 5. बहुविकल्पी प्रश्न -

क). चींटी और हाथी की मित्रता का इम्तिहान कौन लेना चाहते थे?

1) अन्य पशु और पक्षी 2) चींटी 3) हाथी

ख). जानवरों ने किस से क्षमा मांगी?

1) चींटी से. 2) हाथी से. 3) दोनों से

ग) किसान के कितने बेटे थे?

1) दो 2) चार 3) पांच

घ) किसान ने अपने बेटे से क्या मंगवाया?

1) लकड़ियाँ 2) गट्टर. 3) युक्ति

ङ) किसान के बेटों ने क्या प्रतिज्ञा ली?

1) मिलकर रहने की. 2) लड़ने की. 3) गट्टर को तोड़ने की

### 6. व्याकरण भाग-

क) अशुद्ध शब्दों को शुद्ध करके लिखो

1 झूट -----2 पूर्व -----3 स्माज-----

4 विक्री -----5 पुन्य -----

ख) गिनती लिखो

11-----15-----8-----19-----5-----

### 7. अपठित गद्यांश

निम्नलिखित गद्यांश को पढ़कर नीचे लिखे प्रश्नों के उत्तर दीजिए :- नारियल बहुत ही उपयोगी पेड़ है। नारियल का पेड़ बहुत ऊँचा होता है। यह समुद्र के पास रेतीली ज़मीन में उगता है। नारियल का पानीमीठा और स्वादिष्ट होता है।

इसके पत्तों से चटाइयाँ और टोकरियाँ बनती हैं। नारियल के फल को श्रीफल कहते हैं। इसे पवित्र। फल माना जाता है। इसलिए यह पूजा के काम आता है। इसे मदिरोँ में चढ़ाया जाता है।

प्रश्न:- 1- नारियल का पेड़ कैसा होता है? छोटा / मोटा / ऊचा

प्रश्न :-2- नारियल कहाँ उगता है? पानी में। /पहाड़ों पर/ बज़र ज़मीन में

प्रश्न :- 3- नारियल का पानी कैसा होता है? मीठा / खट्टा / -गर्म

## 8.चित्र लेखन

### चित्र वर्णन

चित्र में क्या हो रहा है? अपना उत्तर चित्र के नीचे लिखें।



1 चित्र में कहाँ का दृश्य दिखाया गया है?

-----

2 चित्र में बच्चे क्या कर रहे हैं?

-----

3 चित्र में पक्षी क्या कर रहे हैं?

-----

4 चित्र में से कौन-कौन सी चीज नजर आ रही है ,उनके नाम लिखें।

-----

9. अपना परिचय अपने शब्दों में लिखकर बताएं ( आपका नाम, घर में रहने वाले सदस्यों के नाम तथा रिश्ता, आपका पता आदि)

-----

-----

-----

---

## ਛੁੱਟੀਆਂ ਦਾ ਕੰਮ

ਵਿਸ਼ਾ- ਪੰਜਾਬੀ

ਜਮਾਤ- ਤੀਸਰੀ

ਯਾਦ ਕਰੋ ਅਤੇ ਲਿਖੋ:-ਪਾਠ -4,5,6,ਪ੍ਰਸ਼ਨ- ਉੱਤਰ ਅਤੇ ਅਭਿਆਸ ਕਾਰਜ( ਖ਼ਾਲੀ ਥਾਵਾਂ, ਸ਼ਬਦ ਅਰਥ, ਵਾਕ) ਦੀ ਲਿਖਤੀ ਦੁਹਰਾਈ ਕੀਤੀ ਜਾਵੇ।( ਅਲੱਗ ਕਾਪੀ ਤੇ)

ਗਿਣਤੀ (51-80) ਯਾਦ ਕਰੋ ਅਤੇ ਲਿਖੋ। (ਅਲੱਗ ਕਾਪੀ ਤੇ)

ਲਿਖਤੀ ਕਾਰਜ:-ਕੋਈ ਪੰਜ ਸੁਲੇਖ ਰਚਨਾਵਾਂ ਅਲੱਗ ਕਾਪੀ ਉੱਤੇ ਕਰੋ।

ਗਤੀਵਿਧੀ ਅਧਾਰਿਤ ਕਾਰਜ:-1.(ਰੋਲ ਨੰਬਰ 1-20) ਲਗਾਂ ਮਾਤਰਾਵਾਂ (ਮੁਕਤਾ, ਕੰਨਾ,ਸਿਹਾਰੀ, ਬਿਹਾਰੀ ਤੇ ਐਂਕੜ) ਨਾਲ ਸੰਬੰਧਿਤ ਫਲੈਸ਼ ਕਾਰਡ ਬਣਾਓ।

2.(ਰੋਲ ਨੰਬਰ 21-38) ਲਗਾਂ ਮਾਤਰਾਵਾਂ (ਦੁਲੈਂਕੜ ,ਲਾਂ, ਦੁਲਾਵਾਂ, ਹੋੜਾ ਅਤੇ ਕਨੇੜਾ) ਨਾਲ ਸੰਬੰਧਿਤ ਫਲੈਸ਼ ਕਾਰਡ ਬਣਾਓ ।

3. ਸਾਰੇ ਵਿਦਿਆਰਥੀ (A4 size) ਤੇ ਇੰਟਰਨੈੱਟ ਨਾਲ ਸੰਬੰਧਿਤ ਐਪ ਦੀਆਂ ਤਸਵੀਰਾਂ ਲਗਾ ਕੇ ਉਹਨਾਂ ਦੇ ਨਾਂ ਲਿਖਣਗੇ।

4.ਸਾਰੇ ਵਿਦਿਆਰਥੀ ਜੰਕ ਫੂਡ ਅਤੇ ਪੋਸਟਿਕ ਭੋਜਨ ਦੀਆਂ ਤਸਵੀਰਾਂ (A4 size) ਤੇ ਲਗਾ ਕੇ ਨਾਂ ਲਿਖਣਗੇ।

5.ਸੰਕੇਤਾਂ ਨਾਲ ਕਹਾਣੀ ਪੂਰੀ ਕਰੋ:- ਸ਼ੇਰ ਅਤੇ ਲੇਲਾ (ਪੱਕੀ ਕਾਪੀ ਤੇ grammer side )





(ਭੁੱਖਾ, ਲੇਲਾ, ਝੂਠੇ, ਸਿਆਣਪ, ਨੁਕਸਾਨ, ਖਾਣ, ਗੱਲ, ਮਾਰ)


1. ਇੱਕ ਜੰਗਲ ਵਿੱਚ ਇੱਕ \_\_\_\_\_ ਸ਼ੇਰ ਰਹਿੰਦਾ ਸੀ।
2. ਇੱਕ ਦਿਨ ਉਸਨੇ ਇੱਕ ਛੋਟਾ \_\_\_\_\_ ਦੇਖਿਆ ਅਤੇ ਉਸਨੂੰ \_\_\_\_\_ ਦਾ ਸੋਚਿਆ।
3. ਲੇਲੇ ਨੇ ਡਰਦੇ ਹੋਏ ਕਿਹਾ ਕਿ ਉਸਨੇ ਸ਼ੇਰ ਦਾ ਕੋਈ \_\_\_\_\_ ਨਹੀਂ ਕੀਤਾ।
4. ਸ਼ੇਰ ਨੇ \_\_\_\_\_ ਦੇਸ਼ ਲਗਾ ਕੇ ਉਸਨੂੰ ਦੇਸ਼ੀ ਠਹਿਰਾਇਆ।
5. ਲੇਲੇ ਨੇ ਬੜੀ \_\_\_\_\_ ਨਾਲ ਹਰ ਗੱਲ ਦਾ ਜਵਾਬ ਦਿੱਤਾ।
6. ਪਰ ਸ਼ੇਰ ਨੇ ਉਸਦੀ ਕੋਈ \_\_\_\_\_ ਨਾ ਮੰਨੀ।
7. ਅੰਤ ਵਿੱਚ ਸ਼ੇਰ ਨੇ ਲੇਲੇ ਨੂੰ \_\_\_\_\_ ਦਿੱਤਾ।

ਸਿੱਖਿਆ:- ਜਿਸਦੀ ਲਾਠੀ ਉਸਦੀ ਮੱਝ।

**ਤਸਵੀਰ ਵਰਨਣ:** ਸਾਰੇ ਵਿਦਿਆਰਥੀ ਤਸਵੀਰ ਨੂੰ ਦੇਖ ਕੇ ਪ੍ਰਸ਼ਨ ਦੇ ਉੱਤਰ ਲਿਖਣਗੇ ( ਪੱਕੀ ਕਾਪੀ ਤੇ grammer side ਰੰਗਦਾਰ ਤਸਵੀਰ ਲਗਾ ਕੇ)

1. ਇਹ ਚਿੱਤਰ ਕਿਸ ਥਾਂ ਦਾ ਹੈ?
2. ਬੈਂਚ ਤੇ ਬੈਠੀ ਕੁੜੀ ਕੀ ਪੜ੍ਹ ਰਹੀ ਹੈ ?
3. ਤਲਾਅ ਵਿੱਚ ਕਿੰਨੀਆਂ ਬੱਤਖਾਂ ਹਨ?
4. ਦਰੱਖਤ ਪਿੱਛੇ ਕਿਹੜਾ ਜਾਨਵਰ ਲੁਕਿਆ ਹੈ ?

**ਖ਼ਾਲੀ ਥਾਂਵਾਂ ਭਰੋ**



1. ਲੜਕਾ \_\_\_\_\_ ਉਡਾ ਰਿਹਾ ਹੈ।
2. ਲੜਕੀ \_\_\_\_\_ ਪਿੱਛੇ ਲੁਕੀ ਹੈ।

**ਠੀਕ/ ਗਲਤ**

1. ਫੁੱਟਬਾਲ ਪਾਈ ਵਿੱਚ ਪਈ ਹੈ। ( )
2. ਲੜਕਾ ਦਰੱਖਤ ਤੇ ਬੈਠਾ ਹੈ। ( )

**ਅਣਡਿੱਠਾ ਪੈਰਾ ।( ਪੱਕੀ ਕਾਪੀ ਤੇ Grammer side)**

ਰਵੀ ਇੱਕ ਚੰਗਾ ਬੱਚਾ ਹੈ। ਉਹ ਹਰ ਰੋਜ਼ ਸਵੇਰੇ ਜਲਦੀ ਉੱਠਦਾ ਹੈ। ਉਹ ਆਪਣੇ ਮਾਤਾ ਪਿਤਾ ਦੀ ਸੇਵਾ ਕਰਦਾ ਹੈ। ਰਵੀ ਸਮੇਂ ਤੇ ਸਕੂਲ ਜਾਂਦਾ ਹੈ ਅਤੇ ਧਿਆਨ ਨਾਲ ਪੜ੍ਹਾਈ ਕਰਦਾ ਹੈ। ਉਸਨੂੰ ਖੇਡਣਾ ਵੀ ਬਹੁਤ ਪਸੰਦ ਹੈ। ਉਹ ਆਪਣੇ ਦੋਸਤਾਂ ਨਾਲ ਮਿਲ-ਜੁਲ ਕੇ ਰਹਿੰਦਾ ਹੈ। ਸਭ ਉਸਨੂੰ ਪਿਆਰ ਕਰਦੇ ਹਨ। ਕਿਉਂਕਿ ਰਵੀ ਇੱਕ ਚੰਗਾ

ਅਤੇ ਸਿਆਣਾ ਬੱਚਾ ਹੈ। ਉਹ ਆਪਣੇ ਅਧਿਆਪਕਾਂ ਦਾ ਵੀ ਸਤਿਕਾਰ ਕਰਦਾ ਹੈ। ਰਵੀ ਹਮੇਸ਼ਾ ਸੱਚ ਬੋਲਦਾ ਹੈ। ਉਹ ਹਮੇਸ਼ਾ ਆਪਣੇ ਦੋਸਤਾਂ ਦੀ ਮਦਦ ਕਰਦਾ ਹੈ।

ਪ੍ਰਸ਼ਨ 1. ਰਵੀ ਕਿਹੋ ਜਿਹਾ ਬੱਚਾ ਹੈ ?

ਪ੍ਰਸ਼ਨ 2. ਰਵੀ ਕਿਸ ਦੀ ਸੇਵਾ ਕਰਦਾ ਹੈ?

ਪ੍ਰਸ਼ਨ 3. ਸਭ ਰਵੀ ਨੂੰ ਕਿਉਂ ਪਿਆਰ ਕਰਦੇ ਹਨ?

ਪ੍ਰਸ਼ਨ 4. ਰਵੀ ਹਮੇਸ਼ਾ ਕਿਸ ਦੀ ਮਦਦ ਕਰਦਾ ਹੈ?

### ਖਾਲੀ ਥਾਵਾਂ ਭਰੋ।

1. ਰਵੀ ਹਰ ਰੋਜ਼ ਸਵੇਰੇ \_\_\_\_\_ ਉੱਠਦਾ ਹੈ।

2. ਰਵੀ ਧਿਆਨ ਨਾਲ \_\_\_\_\_ ਕਰਦਾ ਹੈ।

### ਠੀਕ ਗਲਤ

1. ਰਵੀ ਸਮੇਂ ਤੇ ਸਕੂਲ ਜਾਂਦਾ ਹੈ। ( )

2. ਰਵੀ ਆਪਣੇ ਮਾਤਾ-ਪਿਤਾ ਦੀ ਸੇਵਾ ਨਹੀਂ ਕਰਦਾ। ( )

ਲਿੰਗ ਬਦਲੋ: 1. ਮਾਤਾ \_\_\_\_\_ 2. ਅਧਿਆਪਕ \_\_\_\_\_

ਵਚਨ ਬਦਲੋ : 1. ਦੋਸਤ \_\_\_\_\_ 2. ਬੱਚਾ \_\_\_\_\_

ਪ੍ਰੋਜੈਕਟ ਕਾਰਜ : ਸਾਰੇ ਵਿਦਿਆਰਥੀ A4 size sheet ਤੇ( ਅਲੱਗ ਅਲੱਗ sheet) ਪੰਜਾਬ ਅਤੇ ਉੜੀਸਾ ਦੀ ਤੁਲਨਾ ਕਰਦੇ ਹੋਏ ਇਹਨਾਂ ਦੇ ਪਹਿਰਾਵੇ ਅਤੇ ਖਾਣ ਪੀਣ ਸੰਬੰਧੀ ਤਸਵੀਰਾਂ ਲਗਾ ਕੇ ਨਾਮ ਲਿਖਣਗੇ।

ਨੋਟ: ਸਾਰਾ ਕੰਮ ਸਾਫ਼ ਅਤੇ ਸੁੰਦਰ ਲਿਖਾਈ ਵਿੱਚ ਕੀਤਾ ਜਾਵੇ।

**Nankana Sahib Public School, Gill Park, Ludhiana**

**Computer Worksheet**

**Grade – 3<sup>rd</sup>**

**Name** \_\_\_\_\_ **Class/Sec** \_\_\_\_\_ **Roll No.** \_\_\_\_\_

**A. Tick (✓) the correct option:-**

1. After processing, the computer shows the final result as an \_\_\_\_\_.  
a. Input                      b. storage                      c. output
2. \_\_\_\_\_ software helps in doing some specific work.  
a. System                      b. application                      c. operating system
3. Software is mainly of \_\_\_\_\_ types.  
a. Four                      b. three                      c. two
4. \_\_\_\_\_ provides many unique and decorative text styles.  
a. Formatting                      b. Text art                      c. wrapping
5. \_\_\_\_\_ will reverse the case of letters or selected text.  
a. Lowercase                      b. center                      c. tOGGLE cASE
6. \_\_\_\_\_ means to calculate or count.  
a. Compute                      b. System                      c. Computer system
7. \_\_\_\_\_ is the physical components attached to a computer.  
a. Software                      b. Hardware                      c. Malware
8. \_\_\_\_\_ means to change the appearance of text to make it stand out.  
a. Formatting                      b. TextArt                      c. Editing
9. By default, the text is aligned to \_\_\_\_\_ in writer.  
a. Left                      b. center                      c. right

**B. Fill in the blanks:**

(bullet, before, red, thesaurus, process, linux, instruction, versatility)

1. Software is a set of \_\_\_\_\_ that tells the hardware what to do.
2. A computer \_\_\_\_\_ the data as per requirement or instructions.
3. The \_\_\_\_\_ wavy line shows the spelling mistakes.
4. \_\_\_\_\_ option wraps the text on the left side of the object if there is enough space.

5. \_\_\_\_\_ operating system software is available free of cost.
6. \_\_\_\_\_ means computer is used at different places for different purposes.
7. A \_\_\_\_\_ is a dot or a symbol used to display text points in an unordered manner.
8. \_\_\_\_\_ is a list of words grouped together containing synonyms and antonyms.

C. True /false:

1. System unit is also called a computer case. ( )
2. Output is the final result we get through output devices. ( )
3. Computer cannot perform a variety of tasks efficiently. ( )
4. Writer provides four case options for changing text case. ( )
5. We can insert pictures or objects in the document, along with the text. ( )
6. Hard disk is also known as the brain of a computer. ( )
7. Operating system is used to perform a specific type of work. ( )
8. None option wrap text on top or bottom of the border frame of the object. ( )
9. The blue wavy line shows the spelling mistakes. ( )

D. Answer the following questions:

Q1: What do you mean by a computer system?

Ans: \_\_\_\_\_

\_\_\_\_\_

\_\_\_\_\_

Q2: What is System software?

Ans: \_\_\_\_\_

\_\_\_\_\_

\_\_\_\_\_

**Q3: How many option does writer provide for changing text case? Name them.**

Ans: \_\_\_\_\_  
\_\_\_\_\_  
\_\_\_\_\_

**Q4: How are spelling mistakes identified in writer?**

Ans: \_\_\_\_\_  
\_\_\_\_\_  
\_\_\_\_\_

**Q5: Write any four characteristics of computer?**

Ans: \_\_\_\_\_  
\_\_\_\_\_  
\_\_\_\_\_

**Q6: How many option does wrapping text have? Name them.**

Ans: \_\_\_\_\_  
\_\_\_\_\_  
\_\_\_\_\_



## Holiday Homework

Class : 3rd.

Subject : Science

Session-2026-27

(1) Learn Chapter 3,4 for next Periodic Test.

(2) Life of an Astronaut:- Write a short paragraph about what astronauts do. Draw or paste a picture of an astronaut in a space suit.


(3) There are specialist doctors for the treatment of different organs of your body. Use the internet to find out what they are called:-


For (1) Eyes (2)Ears. (3) Nose and throat (4) Heart (5). Bones.


(4) Bird Nest Care Activity:-


 Make a nest using dry grass, cotton, leaves, or paper strips


**BIRD NEST CARE**  
Activity



**How Birds Build Nests**  


**How We Can Care for Nests**  


**I Made a Nest**  


**Birds Take Care of Their Babies**  


**We Should Protect Birds and Nature**  


**Life Skill Learned :**  
 

5) Prepare a model (working) for the given topic according to your

Roll numbers.



Roll no. 1- Solar Eclipse working model.  
Roll no. 3- Circulatory system  
Roll no. 5- Skeletal system  
Roll no. 7- Layers of Earth  
Roll no. 9- Global warming  
Roll no. 11: Lunar eclipse working model  
Roll no. 13- Excretory system  
Roll no. 15 : Structure of teeth (clay model)  
Roll no. 17- Model of photosynthesis  
Roll no. 19: life cycle of butterfly.  
Roll no. 21: Phases of moon  
Roll no. 23: Water cycle  
Roll no. 25 : Working model of balanced diet  
Roll no. 27: 3D model of save planet.  
Roll no. 29: Working model of lightning and thunderstorm  
Roll no. 31: Model of earthquake  
Roll no. 33: Escalator working model  
Roll no. 35: Rainwater harvesting model  
Roll no. 37: Solar system model  
Roll no. 39: Seed germination model  
Roll no. 41: Save Environment model  
Roll no. 43: Animal pyramid working model  
Roll no 45: Digestive system  
NOTE- AVOID USING THERMOCOL IN MODEL MAKING, OTHERWISE  
YOUR MODEL WILL NOT BE CONSIDERED.

**6) Prepare a chart according to roll numbers on A4/A3 sheet.**

Roll no.: 1 to 3: Life cycle of honey bee( By using clay )  
Roll no.: 4 to 6 : Life cycle of silkworm ( By using clay)  
Roll no.: 7 to 9 : Process of formation of cotton from cotton plant.  
Roll no.: 10 to 12: Paste pictures of terrestrial plants.  
Roll no.: 13 to 15: Muscular system  
Roll no.: 16 to 18: Nervous system  
Roll no.: 19 to 21: Paste pictures of different types of plants.  
Roll no.: 22 to 24: Paste pictures of animal habitats : Desert , Forest , aquatic and polar  
Roll no.: 25 to 27: Life cycle of a plant  
Roll no.: 28 to 30 : States of matter  
Roll no : 31 to 33 : Pictures of things around us ( Living and non - living)  
Roll no.: 34 to 36 : Layers of Soil.  
Roll no.: 37 to 39 : Paste pictures of Biodegradable and non biodegradable waste in  
separate column ( A3 sheet).  
Roll no 40 -42 and onwards : Save Water .



# Holiday Homework Assignment

## Subject : Science .( Ch :-3,4)

Solve the given Assignment and paste it on your fair notebook.

Read the following Paragraph and answers the given questions.

Name-.....

1.



1)Name the bird.

Ans-

---

2)Its beak is

- a) hooked
- b) flat
- c) short

3)What type of feet does it have?

Ans-

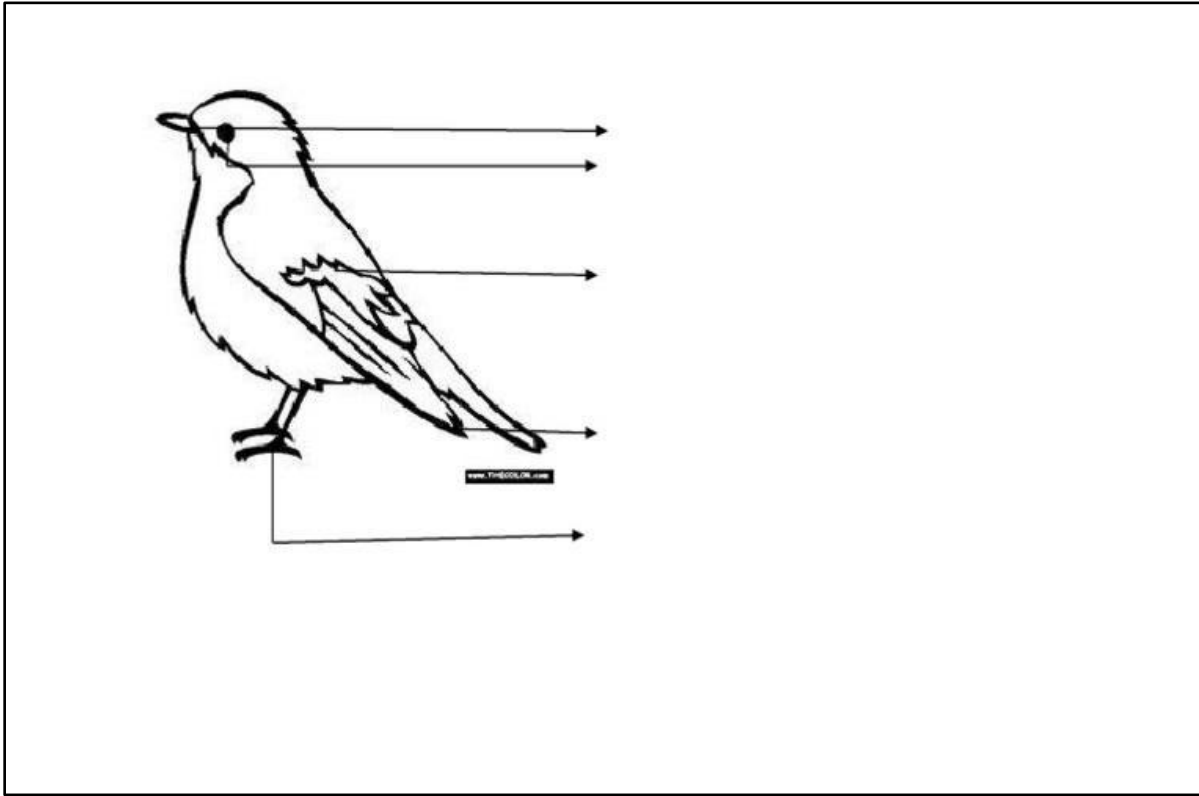
---

4)These feet help the bird to \_\_\_\_\_.

2.Colour and label the given picture



Edit with WPS Office



3. Give answers

1. Where does a woodpecker make its nest?

Ans-

---

2. Why do penguins not build nests like other birds?

Ans-

---

4. Class 3 students went on a picnic to a wildlife park. The guide showed them different animals and explained their eating habits.



Edit with WPS Office



1. Which animal in the story is a herbivore?  
a) Lion      b) Elephant      c) Vulture      d) Frog

2. Which animal is a carnivore?  
a) Monkey      b) Elephant      c) Lion      d) Goat

3. Which animal is an omnivore? Why

Ans-  
\_\_\_\_\_

4. How does a frog catch its food?

Ans-  
\_\_\_\_\_

5. Fill in the blanks

1. Rabbits and rats are \_\_\_\_\_ animals.

2. A rabbit uses its \_\_\_\_\_ teeth to cut food.

3. Mastication helps in easy \_\_\_\_\_ of food.

6. Students visited a farm and watched birds carefully. A sparrow was pecking grains from the ground. A parrot sat on a tree and cracked seeds using its strong beak. A crow picked leftover food from the field. A peacock searched for insects and seeds in the grass. An eagle flew high in the sky looking for prey.

Questions

1. Which bird in the story eats both plants and insects?

Ans-  
\_\_\_\_\_

2. How does the parrot's beak help it eat hard food?

Ans-  
\_\_\_\_\_

3. Why is the crow called a helpful bird for the environment?

Ans-  
\_\_\_\_\_

4. Why does the eagle fly high while searching for food?

Ans-  
\_\_\_\_\_



7. Name the following

1. Animals that eat only plants are called

Ans: \_\_\_\_\_

2. Animals that eat both plants and animals are called

Ans:- \_\_\_\_\_

3. The rabbit bites hard food with its front teeth and is a

Ans:- \_\_\_\_\_

4. The buffalo chews the cud again and again, which is part of \_\_\_\_\_

5. Plants and animals linked together by eating and being eaten form a \_\_\_\_\_

6. Birds with chisel-shaped beaks for drilling wood are called

Ans:- \_\_\_\_\_

7. Birds with webbed feet for swimming are called

Ans:- \_\_\_\_\_

8. Birds with three toes in front and one at the back for sitting on branches are called

Ans: \_\_\_\_\_

9. Birds with strong, thick beaks for breaking nuts are called

Ans: \_\_\_\_\_

10. Birds with wide feet for walking on mud are called

Ans:- \_\_\_\_\_'





Edit with WPS Office



Edit with WPS Office